

Name

My Homework

Lesson 11

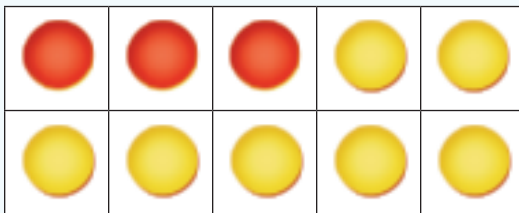
Ways to Make 10

Homework Helper

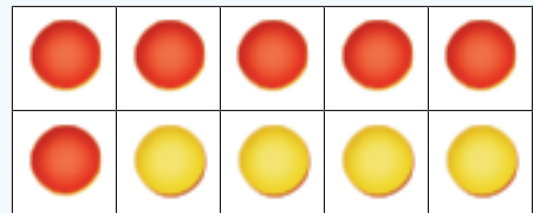


Need help? connectED.mcgraw-hill.com

There are many ways to make 10.



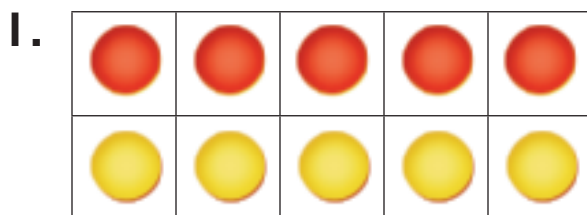
$$3 + 7 = 10$$



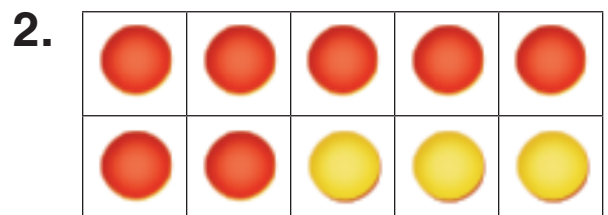
$$6 + 4 = 10$$

Practice

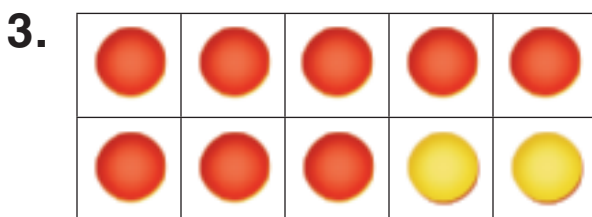
Write the numbers that make 10.



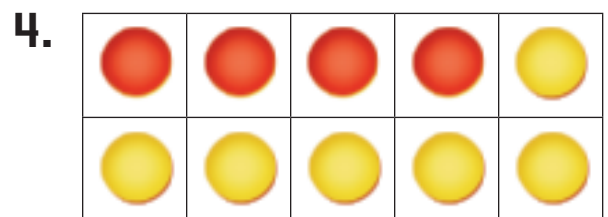
$$\underline{\quad} + \underline{\quad} = 10$$



$$\underline{\quad} + \underline{\quad} = 10$$



$$\underline{\quad} + \underline{\quad} = 10$$



$$\underline{\quad} + \underline{\quad} = 10$$

Draw and color a way to make 10 using two numbers. Write the numbers.

5.

_____ + _____ = 10

6.

_____ + _____ = 10

7. There are 3 bears drinking from a creek. How many more bears need to join them to make 10 bears drinking from the creek?

I'm thirsty!



_____ bears

Test Practice

8. Liam has 6 counters. How many more counters does he need to have to make 10 counters?

- 4 counters 5 counters 6 counters 16 counters
-



Math at Home Give your child ten crayons. Have him or her put the crayons in two groups showing a way to make 10. Ask your child to show another way to make 10.