

Name .....

# My Homework

Lesson 12

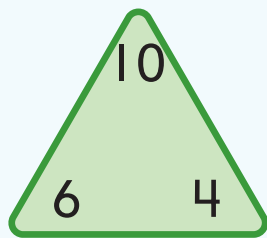
Fact Families

## Homework Helper



Need help? [connectED.mcgraw-hill.com](http://connectED.mcgraw-hill.com)

Use related facts to complete a fact family.



$$6 + 4 = 10$$

$$4 + 6 = 10$$

$$10 - 4 = 6$$

$$10 - 6 = 4$$

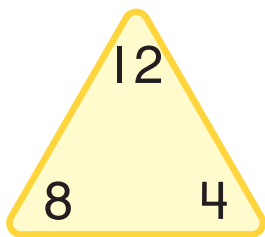
### Helpful Hint

Each fact in a fact family uses the same three numbers.

## Practice

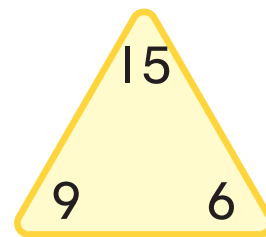
Complete each fact family.

1.



+	=
_____	_____
+	=
_____	_____
-	=
_____	_____
-	=
_____	_____

2.



+	=
_____	_____
+	=
_____	_____
-	=
_____	_____
-	=
_____	_____

3. There are 8 apples on one tree.  
There are 7 apples on another tree.  
How many apples are there in all?

\_\_\_\_\_ apples

4. Sam has 7 toy trucks in one box. He has one less than that number in another box. How many toy trucks does he have in all?

Beep! Beep!



\_\_\_\_\_ toy trucks

## Vocabulary Check



Circle the correct answer.

5. Which group shows a **fact family**?

$2 + 3 = 5$

$1 + 4 = 5$

$2 + 1 = 3$

$3 + 2 = 5$

$1 + 5 = 6$

$2 + 2 = 4$

$5 - 3 = 2$

$1 + 7 = 8$

$2 + 3 = 5$

$5 - 2 = 3$

$1 + 8 = 9$

$2 + 4 = 6$



**Math at Home** Have your child write the fact family for the numbers 6, 7, and 13.