

Name \_\_\_\_\_

# My Homework

## Lesson 2

### Regroup Ones as Tens

#### Homework Helper



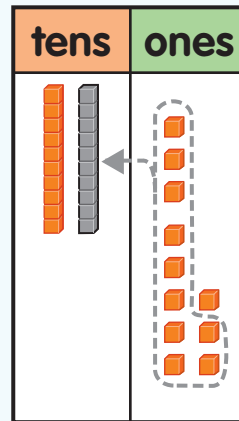
Need help? [connectED.mcgraw-hill.com](http://connectED.mcgraw-hill.com)

Find  $13 + 8$ .

**Step 1** Show each number.

**Step 2** If there are 10 or more ones, regroup.

**Step 3** Write the number of tens and ones.



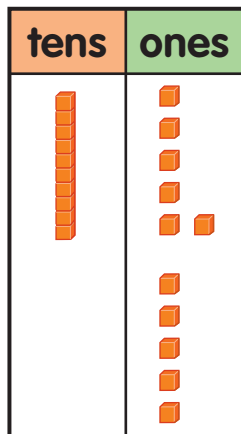
$$13 + 8 = 21$$

## Practice

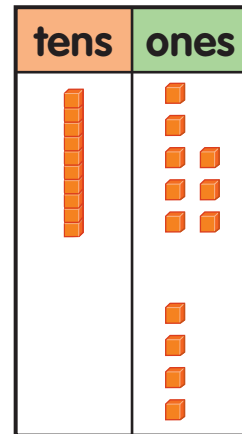
Circle the ones to show regrouping ten ones as 1 ten. Draw your answer.



1.  $16 + 5 = \underline{\quad}$

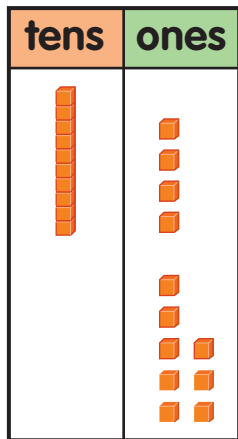


2.  $18 + 4 = \underline{\quad}$

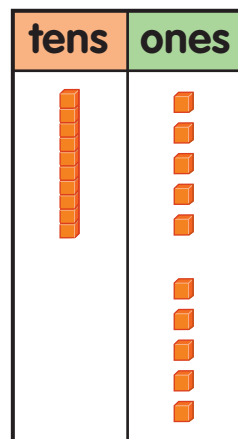


Circle the ones to show regrouping ten ones as 1 ten. Draw your answer.

3.  $14 + 8 = \underline{\hspace{2cm}}$



4.  $15 + 5 = \underline{\hspace{2cm}}$



5. Max donated 16 dog collars to the dog shelter. Mia donated 6 leashes. How many items were donated?

           items

*That collar is perfect for me!*

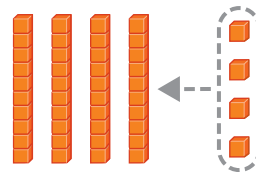
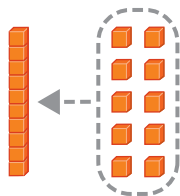


## Vocabulary Check



Circle the picture that matches the word.

6. **regroup**



**Math at Home** Using toothpicks have your child show you  $25 + 5$ . Ask how many tens there are in the answer.