

Name \_\_\_\_\_

# My Homework

## Lesson 2

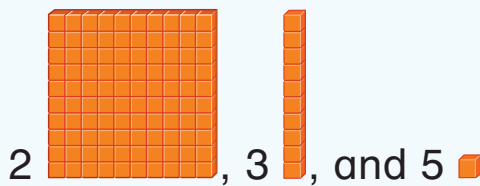
### Hundreds, Tens, and Ones

### Homework Helper



Need help? [connectED.mcgraw-hill.com](http://connectED.mcgraw-hill.com)

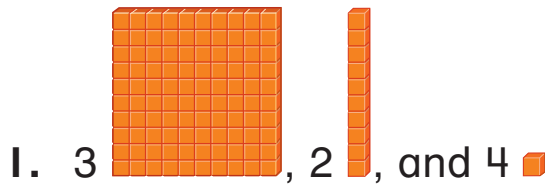
Use hundreds, tens, and ones to show a number.



hundreds	tens	ones
2	3	5

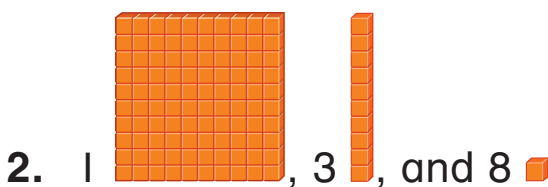
## Practice

Write how many hundreds, tens, and ones.  
Then write the number.



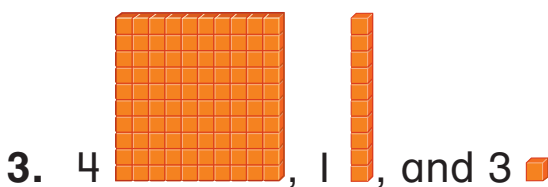
hundreds	tens	ones

\_\_\_\_\_



hundreds	tens	ones

\_\_\_\_\_



hundreds	tens	ones

\_\_\_\_\_

Write how many hundreds, tens, and ones.

4.  $536 =$  \_\_\_\_\_ hundreds, \_\_\_\_\_ tens, and \_\_\_\_\_ ones

5.  $295 =$  \_\_\_\_\_ hundreds, \_\_\_\_\_ tens, and \_\_\_\_\_ ones

Solve. Draw base-ten blocks to model.

6. Percy has 342 pencils.  
How many tens does he have?

\_\_\_\_\_ tens

7. Luis collected 613 beads.  
How many hundreds does he have?

\_\_\_\_\_ hundreds

## Test Practice

8. A number has 6 tens, 9 ones, and 5 hundreds.  
What number is it?

695



596



569



965



**Math at Home** Write the number 647. Ask your child to tell you how many hundreds, tens, and ones are in the number.

