

Name

My Homework

Lesson 7

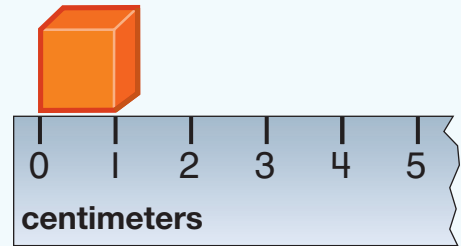
Centimeters and Meters

Homework Helper



Need help? connectED.mcgraw-hill.com

The cube is 1 centimeter long.
There are 100 centimeters in
1 meter.





Practice

Find the object. Estimate the length. Measure each object in centimeters or meters.

Object	Estimate	Measure
<p>1.</p>	about _____ centimeters	about _____ centimeters
<p>2.</p>	about _____ centimeters	about _____ centimeters
<p>3.</p>	about _____ meters	about _____ meters

Find the object. Estimate the width. Measure each object in centimeters or meters.

Object	Estimate	Measure
<p>4.</p> 	<p>about _____ centimeters</p>	<p>about _____ centimeters</p>
<p>5.</p> 	<p>about _____ meters</p>	<p>about _____ meters</p>

6. One pine tree is 4 meters tall. The other pine tree is 3 meters tall. How many centimeters taller is the first pine tree?

_____ centimeters

Vocabulary Check

7. Circle the answer that is the same as 1 **meter**.

1 centimeter

10 centimeters

100 centimeters

1,000 centimeters



Math at Home Have your child identify objects he or she would measure using centimeters.