

Name \_\_\_\_\_

# My Homework

## Lesson 4

### Three-Dimensional Shapes

### Homework Helper



Need help? [connectED.mcgraw-hill.com](http://connectED.mcgraw-hill.com)

A three-dimensional shape has length, width, and height.



sphere



cube



pyramid



cone



cylinder

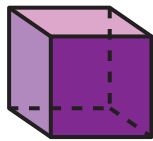


rectangular prism

## Practice

Write the name of the shape. Circle the objects that are the same shape.

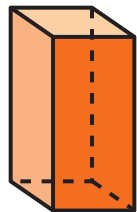
1.



\_\_\_\_\_




2.



\_\_\_\_\_



3.



\_\_\_\_\_



Write the name of each shape. Circle the objects that are the same shape.


4.



\_\_\_\_\_



5.



\_\_\_\_\_



6. I have 6 surfaces. 2 of my surfaces are smaller than the others. I can stand up tall. What shape am I?

\_\_\_\_\_

## Vocabulary Check



Draw lines to match.

7. cylinder



8. rectangular prism



9. cube



10. cone



**Math at Home** Have your child identify items in your home that match the shapes he or she learned about in this lesson.