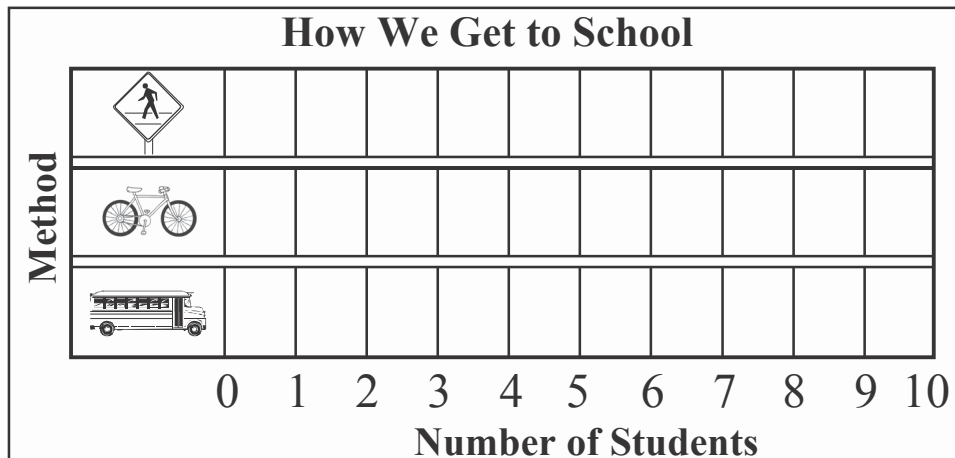


Chapter Test, Form 1A

Use the tally chart and graph below to answer the questions. Circle the answers.

- How many students walk or ride a bike to school?
A. 7 B. 8 C. 9
- How many more students ride the bus than ride a bike?
F. 4 G. 5 H. 6
- How many students took the survey?
A. 13 B. 15 C. 17

How Do You Get to School?		
Method	Tally	Total
Walk		6
Bike		3
Bus		8




- How many squares should be shaded to show the number of students who bike?
F. 3 G. 4 H. 5
- How many squares should be shaded to show the number of students who take the bus?
A. 7 B. 8 C. 9



Chapter Test, Form 1A *(continued)*

Use the picture graph and line plot below to answer the questions. Circle the answers.



Key: Each picture = 1 vote.

6. Which shell was found least often?



7. How many total  and  were found?

A. 5

B. 6

C. 7

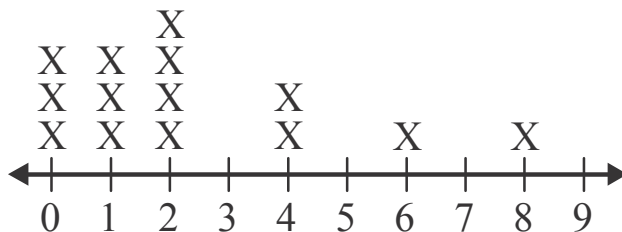
8. How many total shells were found?

F. 14

G. 15

H. 16

Number of Pets Students Have



9. Look at the line plot. How many students have 1 pet?

A. 2

B. 3

C. 4

10. How many pets do most students have?

F. 0

G. 1

H. 2

