

Name

My Homework

Lesson 1




Take a Survey

Homework Helper



Need help? connectED.mcgraw-hill.com

A tally chart shows the results of a survey.

| Favorite Vegetable | Tally | Total |
|--|-------|-------|
|  Carrot | | 6 |
|  Broccoli | | 3 |
|  Corn | | 8 |

Helpful Hint

| means 1.

||||| means 5.

Practice

Ask 10 people their favorite exercise. Use tally marks to record the data.

Use the data in the chart to answer the questions.

| Favorite Exercise | Tally | Total |
|-------------------|-------|-------|
| Jump Rope | | |
| Run | | |
| Dance | | |
| Play Baseball | | |

1. How many people like to run and dance? _____

2. Do more people like to run and play baseball or dance and jump rope? _____

Ask 10 people their favorite snack. Use tally marks to record the data.

Use the data in the chart to answer the questions.

| Favorite Snack | Tally | Total |
|----------------|-------|-------|
| Fruit | | |
| Chips | | |
| Cookies | | |
| Carrot Sticks | | |

3. What snack do people like the most? _____
4. How many people like healthful snacks the most? _____

Ask 10 people their favorite juice flavor. Use tally marks to record the data.

Use the data in the chart to answer the questions.

| Favorite Juice | Tally | Total |
|----------------|-------|-------|
| Apple | | |
| Orange | | |
| Cranberry | | |
| Tomato | | |

5. What juice do people like the least? _____
6. How many people like cranberry juice and apple juice in all? _____



Vocabulary Check



Circle the word that matches the definition.

7. Numbers or symbols that show information.

tally marks

survey

data



Math at Home Help your child to create a survey that they can give to family members.