

Name _____

My Homework

Lesson 1

Time to the Hour

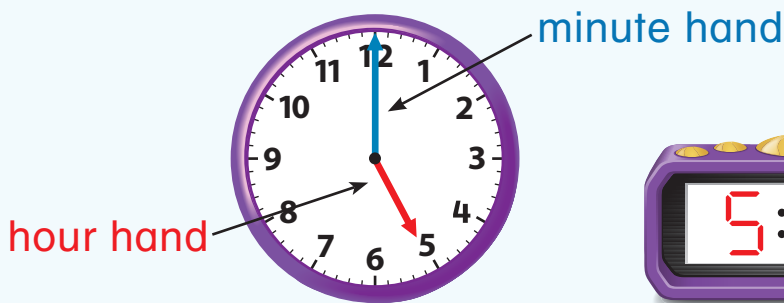
Homework Helper

eHelp



Need help? connectED.mcgraw-hill.com

You can tell and write time to the hour.




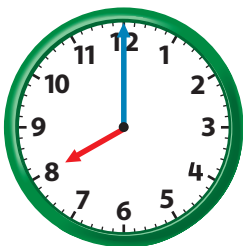
It is 5 o'clock or 5:00.

hour minutes after the hour

Practice

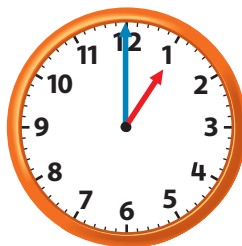
Tell what time is shown. Write the time.

1.




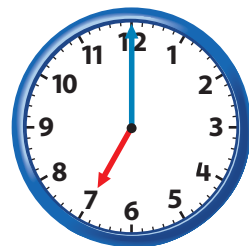
_____ o'clock

2.



_____ o'clock

3.




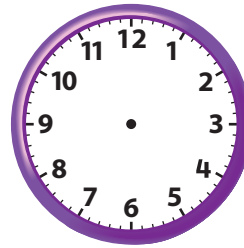
_____ o'clock

Draw the hands on each clock. Then write the time.

4. 2 o'clock

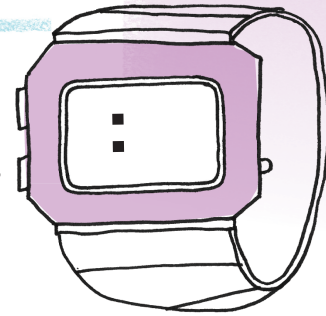


5. 4:00



6. The time on Javier's watch is 3 hours after 2:00. Write the time on his watch.

Javier's cool watch!



Vocabulary Check



Complete each sentence.

hour hand

analog clock

minute hand

digital clock

7. An _____ has an hour and a minute hand.
8. The _____ points to the hour on an analog clock.
9. A _____ uses numbers on a screen to show time.
10. The _____ points to the minute on an analog clock.



Math at Home Throughout the day, ask your child to look at an analog or digital clock showing a time to the hour and have them tell you the time.