

Name _____

My Homework

Lesson 4

Make Bar Graphs

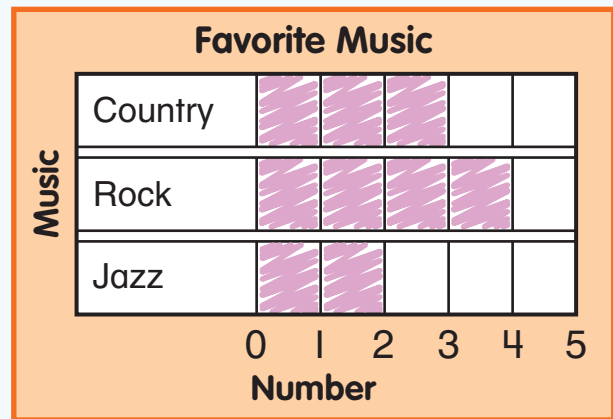
Homework Helper



Need help? connectED.mcgraw-hill.com

You can use data from a tally chart to make a bar graph.

Favorite Music	Tally	Total
Country		3
Rock		4
Jazz		2



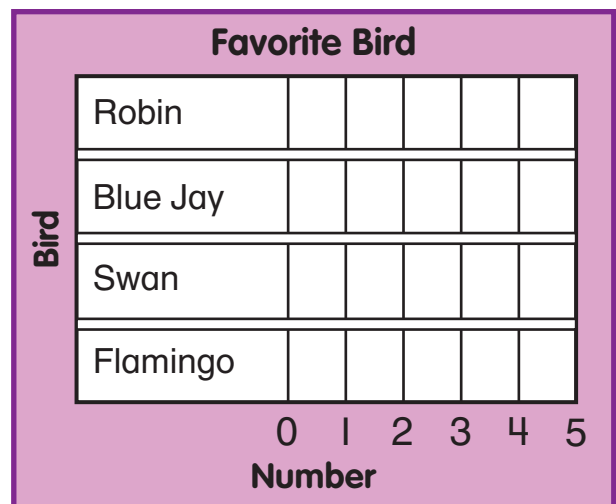
Practice

Use the tally chart to make a bar graph.

Helpful Hint
Color 1 box for each tally mark.

1.

Favorite Bird	Tally	Total
Robin		3
Blue Jay		2
Swan		4
Flamingo		5



I wonder what kind of birds we are?



Use the tally chart to make a bar graph.

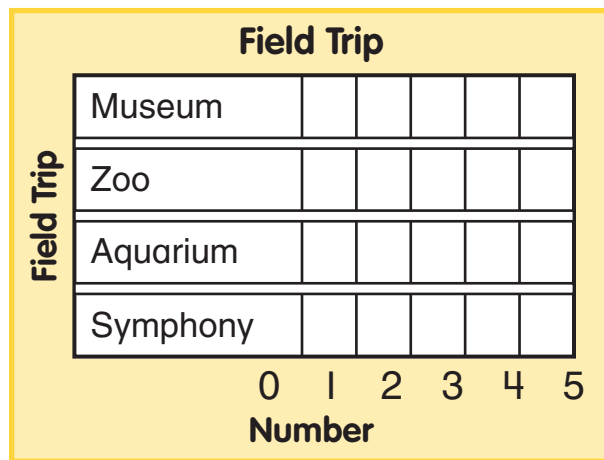
2.

Favorite Color	Tally	Total
Red		4
Blue		5
Pink		4
Green		2



Use the data to fill in the bar graph.

3. 15 people voted on their favorite field trip. 2 voted for the symphony. 5 voted for the zoo. The same number voted for the museum and the aquarium.

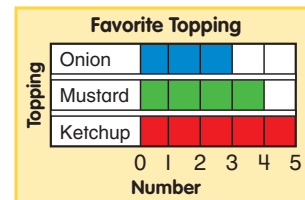
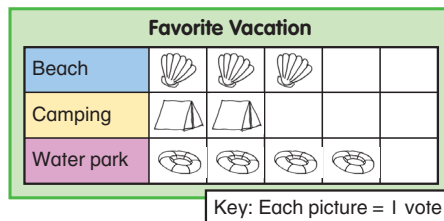


Vocabulary Check



4. Circle the **bar graph**.

Favorite Milk	Tally	Total
Chocolate		5
White		2
Strawberry		3



Math at Home Help your child make a bar graph of the type of weather he or she sees for a week.