

Chapter Test, Form 1B

Use the tally chart and graph below to answer the questions. Circle the answers.

1. How many students chose cereal or eggs?

- A. 6 B. 7 C. 8

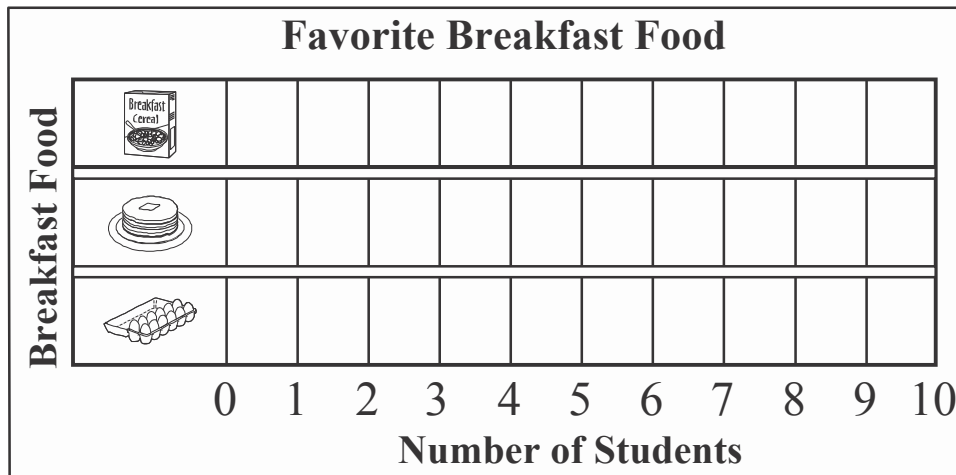
2. How many more students chose pancakes than eggs?

- F. 2 G. 3 H. 4

3. How many students took the survey?

- A. 13 B. 14 C. 15

What Is Your Favorite Breakfast?		
Breakfast Food	Tally	Total
Cereal		5
Pancakes		7
Eggs		3



4. How many squares should be shaded to show the number of students who like cereal?

- F. 3 G. 4 H. 5


5. How many squares should be shaded to show the number of students who like pancakes?

- A. 7 B. 8 C. 9



Chapter Test, Form 1B *(continued)*

Use the picture graph and line plot below to answer the questions. Circle the answers.



Key: Each picture = 1 vote.

6. Which is the fish with the fewest number in the aquarium?



7. How many total  and  are in the aquarium?

A. 7

B. 8

C. 9

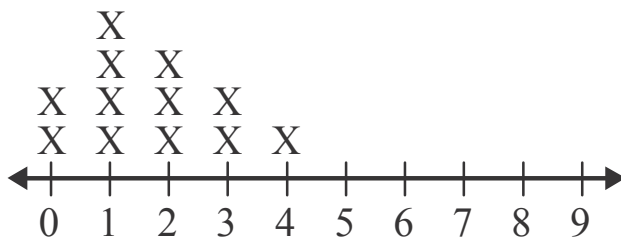
8. How many total fish are in the aquarium?

F. 16

G. 17

H. 18

Number of Siblings Students Have



9. How many students have 3 siblings?

A. 2

B. 3

C. 4

10. How many siblings do most students have?

F. 0

G. 1

H. 2

