

Name _____

My Homework


Lesson 9

Compare Metric Lengths

Homework Helper

Need help? connectED.mcgraw-hill.com

You can compare lengths of objects.



The brown guinea pig is 3 centimeters longer.


Practice

Find the objects. Measure them. Write the lengths. Write longer or shorter.

1.



_____ centimeters




_____ centimeters

The spoon is _____ centimeters _____.

2.



_____ meters




_____ meters

The house is _____ meters _____.

Find the objects. Measure them. Write the lengths.
Write longer or shorter.




_____ centimeters

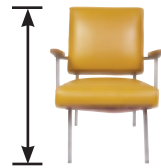


_____ centimeters

The crayon is _____ centimeters _____.



_____ meters



_____ meters

The couch is _____ meters _____.

How far
is the house
from here?

5. The path from my house to the barn
is 50 meters. The path from the barn
to the pond is 30 meters. How long is
the path in all?

_____ meters

Test Practice

6. $56 \text{ meters} + 35 \text{ meters} =$ _____ meters.

86

87

91

95



Math at Home Have your child measure two beds in your house and compare the lengths in meters.