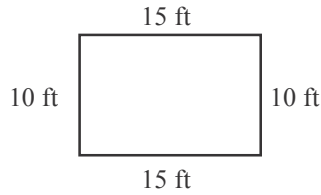


Lesson 1 Reteach

Measure Perimeter

Perimeter is the distance around a closed figure. To find the perimeter, add the lengths of all the sides.

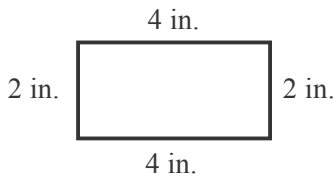
$$\begin{array}{r} 10 \text{ ft} \\ 15 \text{ ft} \\ 10 \text{ ft} \\ + 15 \text{ ft} \\ \hline 50 \text{ ft} \end{array}$$



The perimeter of the rectangle is 50 feet.

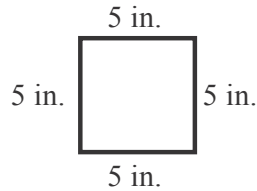
Find the perimeter of each figure.

1.



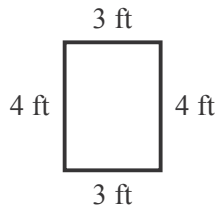
_____ + _____ + _____ + _____ = _____

2.

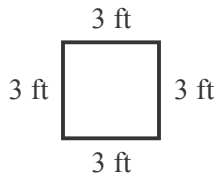


_____ + _____ + _____ + _____ = _____

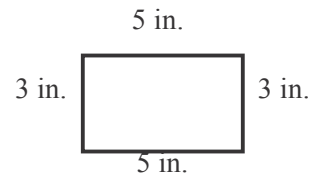
3.



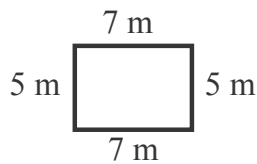
4.



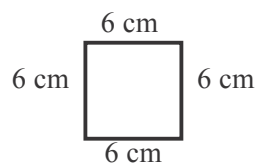
5.



6.



7.



8.

