

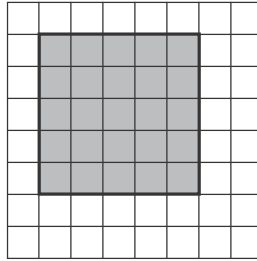
Lesson 4 Reteach

Measure Area

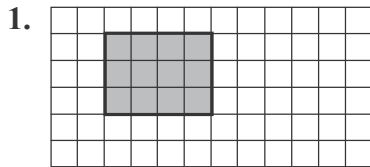
Area is the number of square units needed to cover a region or figure.

You can use these two ways to find the area of a rectangle or square.

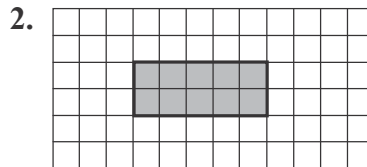
- Count the number of square units.
There are 25 square units.
The area is 25 square units.
- Multiply the length times the width.
 $5 \times 5 = 25$
The area is 25 square units.



Find the area of each figure.



length: _____ units
width: _____ units
area = _____ square units



length: _____ units
width: _____ units
area = _____ square units

