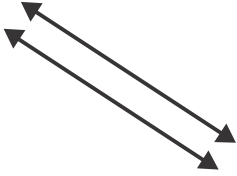
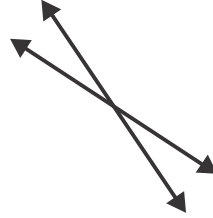


Lesson 2 Reteach

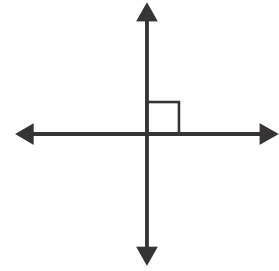
Draw Parallel and Perpendicular Lines



Parallel lines
Lines that are always the same distance apart. They will never meet.



Intersecting lines
Lines that meet or cross each other.



Perpendicular lines
Lines that meet or cross to form right angles.

Describe the figure. Use *parallel*, *intersecting*, or *perpendicular*.

