

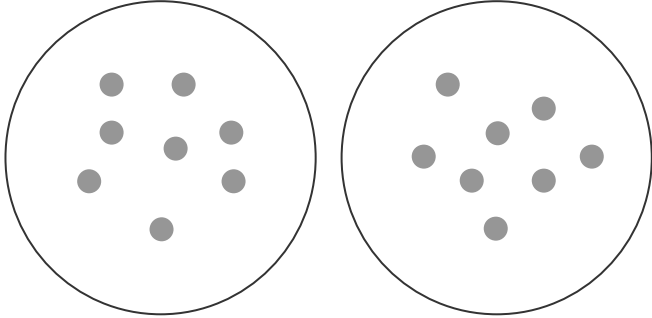
Division by Sharing (Word Problems 1)



Name:

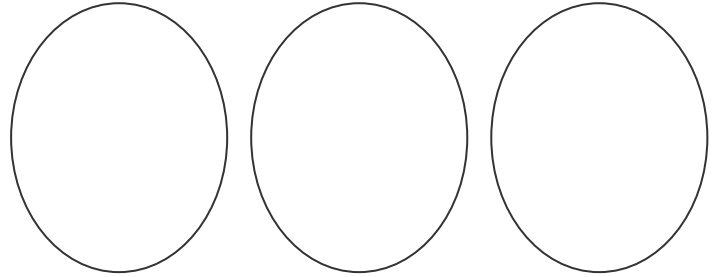
Date:

Jordan has a bag of 16 sweets. If he shares them equally with his brother, how many sweets will they get each?



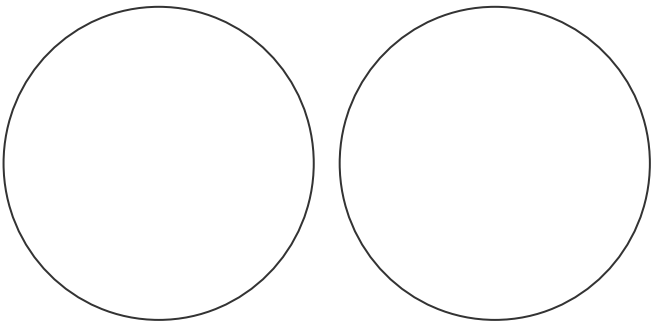
$$16 \div 2 = 8$$

Three friends found some conkers and shared them out. If there were 18 conkers altogether, how many did they get each?



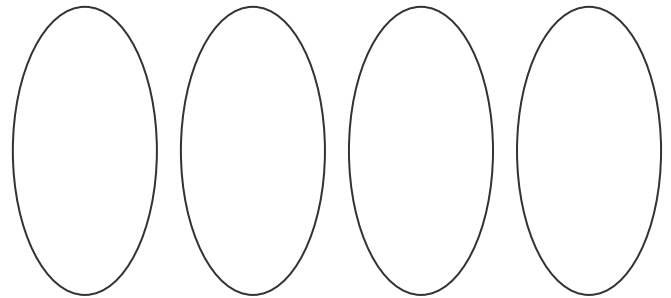
$$18 \div 3 =$$

A chef shares 14 pieces of pepperoni onto two pizzas. How many did he put on each one?



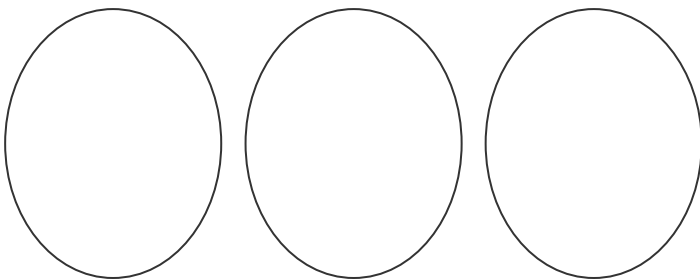
$$14 \div 2 =$$

There are 20 children in class 2G. Their teacher sorted them into four equal groups. How many children were there in each group?



$$20 \div 4 =$$

Marge gives her three grandchildren £21 to share between them. How much money do they get each?



Mrs. Jones plants 24 flowers equally in four rows. How many flowers does she plant in each row?

