

Weight Estimation

Estimate the weight of each object.

1)



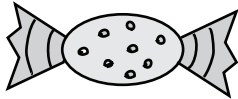
- 8 kg
- 800 g
- 80 g

2)




- 70 g
- 700 g
- 7 kg

3)



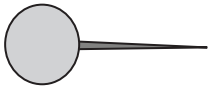
- 40 g
- 4 g
- 4 kg

4)



- 5 g
- 50 g
- 500 g

5)



- 300 g
- 30 g
- 3 g

6)



- 10 g
- 1 kg
- 100 g

7)



- 600 g
- 60 g
- 6 g

8)



- 10 kg
- 100 g
- 10 g

Answer Key

Estimate the weight of each object.

1)



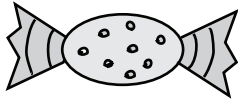
- **8 kg**
- 800 g
- 80 g

2)




- **70 g**
- 700 g
- 7 kg

3)



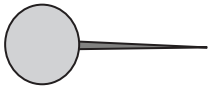
- 40 g
- **4 g**
- 4 kg

4)



- 5 g
- 50 g
- **500 g**

5)



- 300 g
- 30 g
- **3 g**

6)



- 10 g
- **1 kg**
- 100 g

7)



- **600 g**
- 60 g
- 6 g

8)



- 10 kg
- **100 g**
- 10 g