

## Lesson 5 Reteach

### *Tell Time to the Minute*

The clock below is a digital clock. A digital clock shows the time in numbers on a screen.



**Read:** four twenty-eight

**Write:** 4:28

The digits **before** the colon (:) show the hour.  
The digits **after** the colon (:) show the minutes.

The clock below is an analog clock. An analog clock has an hour hand and a minute hand.



**Read:** eight thirty


**Write:** 8:30

To find the hour: Look at the shorter hand. It has passed the 8, but it has not reached the 9. So, the hour is 8.

To find the minute: Look at the longer hand. Start at the 12 and count by 5s. At the 6, the minute hand shows 30 minutes.


**Circle the letter of the correct time.**

1.




**A.** 1:15   **B.** 1:45

2.



**A.** 11:45   **B.** 10:15

3.



**A.** 12:50   **B.** 1:50