

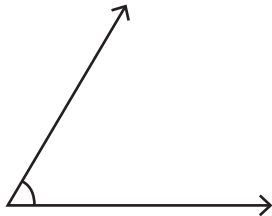
Name : _____

Score : _____

Classifying Angles

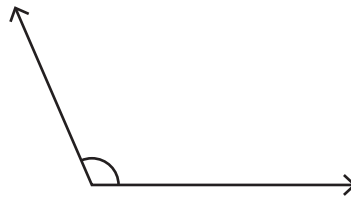
Classify each angle as acute, obtuse, right or straight.

1)



Type : _____

2)



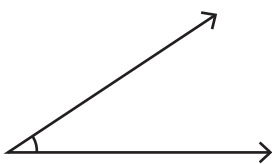
Type : _____

3)



Type : _____

4)



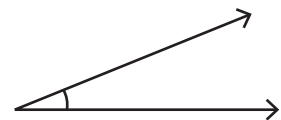
Type : _____

5)



Type : _____

6)



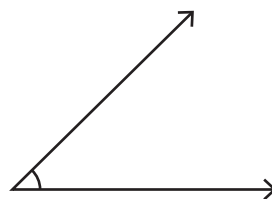
Type : _____

7)



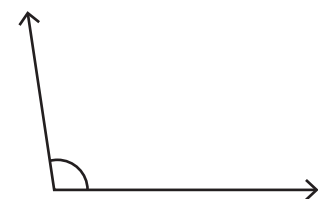
Type : _____

8)



Type : _____

9)



Type : _____

10) 49°

Type : _____

11) 82°

Type : _____

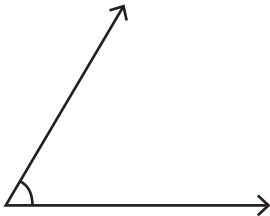
12) 180°

Type : _____

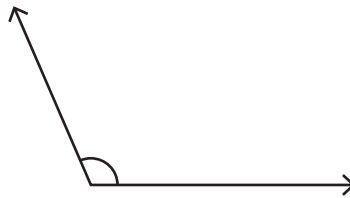
Answer Key

Classify each angle as acute, obtuse, right or straight.

1)

Type : Acute

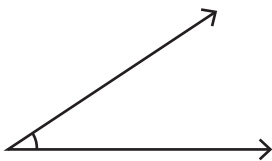
2)

Type : Obtuse

3)

Type : Right

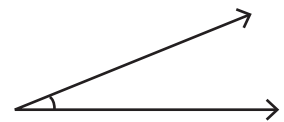
4)

Type : Acute

5)

Type : Obtuse

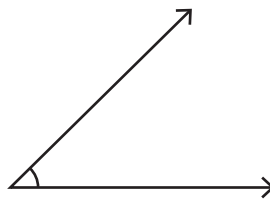
6)

Type : Acute

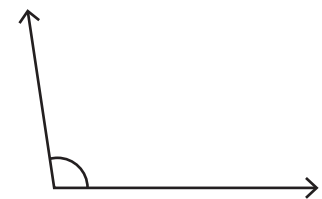
7)

Type : Straight

8)

Type : Acute

9)

Type : Obtuse10) 49° Type : Acute11) 82° Type : Acute12) 180° Type : Straight