

Name: _____

Cookie Sales Pictograph

Four Girl Scouts sold cookies for one month. The list below shows how many boxes were sold by each Girl Scout.

Isabella - 40 boxes

Sam - 35 boxes

Emma - 15 boxes

Grace - 50 boxes

Use the information from the list to complete the pictograph below and answer the questions.

Name	Cookie Sales
Isabella	
Emma	
Sam	
Grace	

KEY

Each  = 5 boxes

- How many boxes of cookies did the girls sell in all? 1. _____
- How many more boxes of cookies did Isabella sell than Emma? 2. _____
- Which two girls sold a total of 75 boxes of cookies? 3. _____
- Half of the cookies sold by Grace were Thin Mints. How many boxes of Thin Mints did Grace sell? 4. _____

ANSWER KEY

Cookie Sales Pictograph

Four Girl Scouts sold cookies for one month. The list below shows how many boxes were sold by each Girl Scout.




Isabella - 40 boxes

Sam - 35 boxes


Emma - 15 boxes

Grace - 50 boxes

Use the information from the list to complete the pictograph below and answer the questions.

Name	Cookie Sales
Isabella	
Emma	
Sam	
Grace	

KEY

Each  = 5 boxes

- How many boxes of cookies did the girls sell in all? 1. 140
- How many more boxes of cookies did Isabella sell than Emma? 2. 25
- Which two girls sold a total of 75 boxes of cookies? 3. Isabella and Sam
- Half of the cookies sold by Grace were Thin Mints. How many boxes of Thin Mints did Grace sell? 4. 25