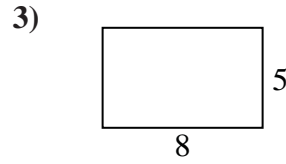
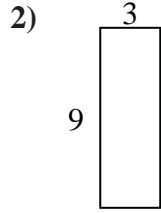
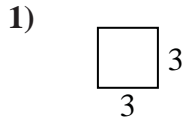




Find the perimeter and area of each figure. Each figure is in inches (in). Not to scale.

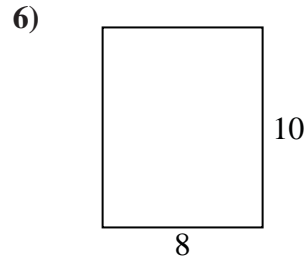
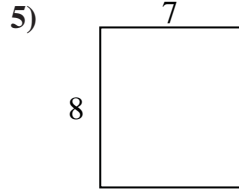
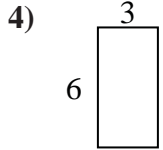
Answers



1. \_\_\_\_\_

2. \_\_\_\_\_

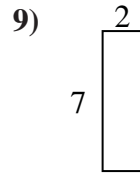
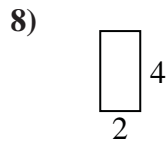
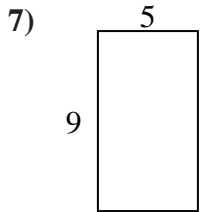
3. \_\_\_\_\_



4. \_\_\_\_\_

5. \_\_\_\_\_

6. \_\_\_\_\_

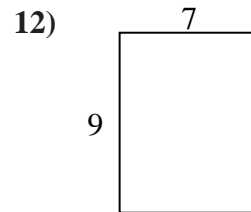
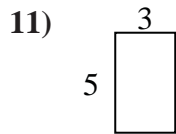
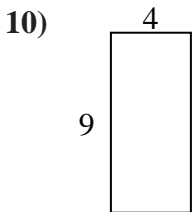


7. \_\_\_\_\_

8. \_\_\_\_\_

9. \_\_\_\_\_

10. \_\_\_\_\_

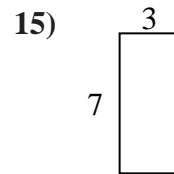
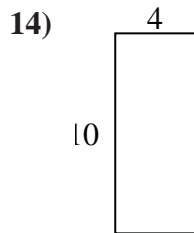
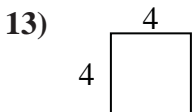


11. \_\_\_\_\_

12. \_\_\_\_\_

13. \_\_\_\_\_

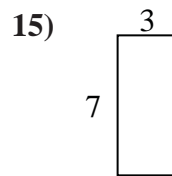
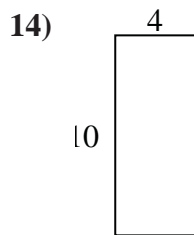
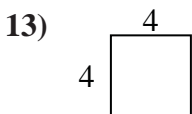
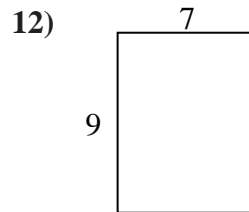
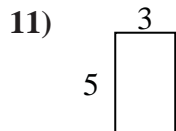
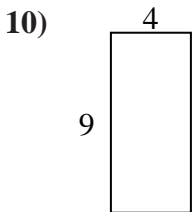
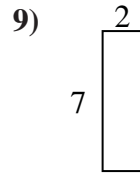
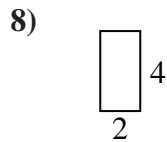
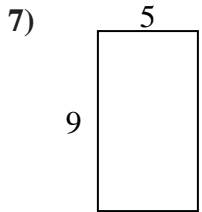
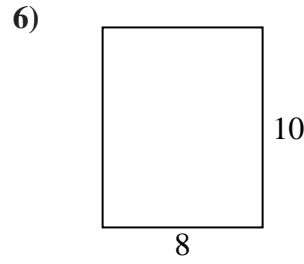
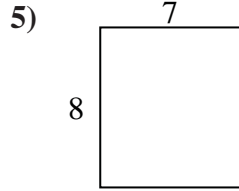
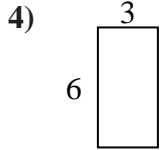
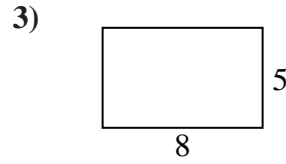
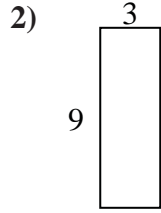
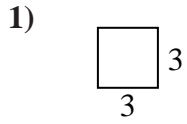
14. \_\_\_\_\_



15. \_\_\_\_\_



Find the perimeter and area of each figure. Each figure is in inches (in). Not to scale.



Answers

1. 12 in    9 in<sup>2</sup>
2. 24 in    27 in<sup>2</sup>
3. 26 in    40 in<sup>2</sup>
4. 18 in    18 in<sup>2</sup>
5. 30 in    56 in<sup>2</sup>
6. 36 in    80 in<sup>2</sup>
7. 28 in    45 in<sup>2</sup>
8. 12 in    8 in<sup>2</sup>
9. 18 in    14 in<sup>2</sup>
10. 26 in    36 in<sup>2</sup>
11. 16 in    15 in<sup>2</sup>
12. 32 in    63 in<sup>2</sup>
13. 16 in    16 in<sup>2</sup>
14. 28 in    40 in<sup>2</sup>
15. 20 in    21 in<sup>2</sup>