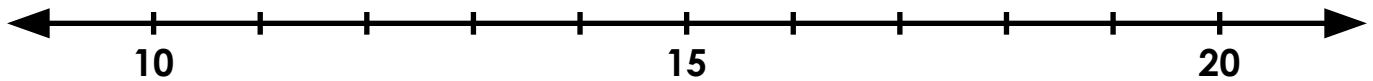


Name: _____

Rounding to the Nearest Ten

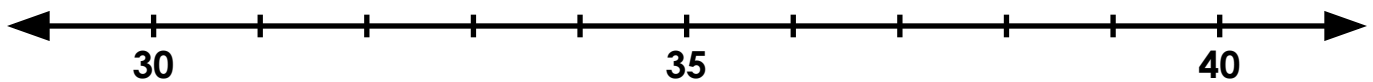
Find 16 on the number line and label it.



Is 16 closer to 10 or 20? _____

What is 16 rounded to the nearest 10? _____

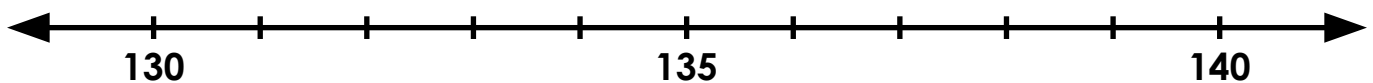
Find 34 on the number line and label it.



Is 34 closer to 30 or 40? _____

What is 34 rounded to the nearest 10? _____

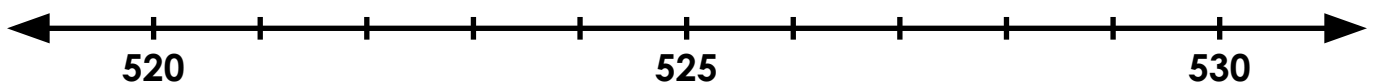
Find 138 on the number line and label it.



Is 138 closer to 130 or 140? _____

What is 138 rounded to the nearest 10? _____

Find 522 on the number line and label it.



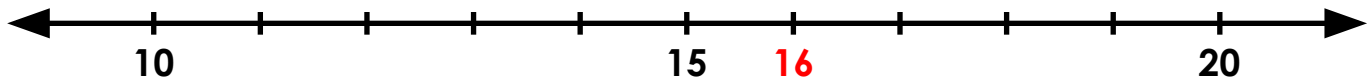
Is 522 closer to 520 or 530? _____

What is 522 rounded to the nearest 10? _____

ANSWER KEY

Rounding to the Nearest Ten

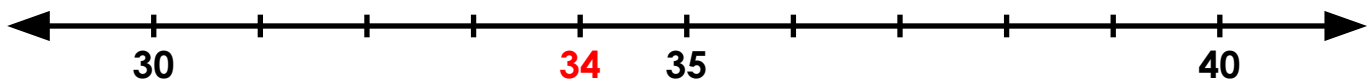
Find 16 on the number line and label it.



Is 16 closer to 10 or 20? 20

What is 16 rounded to the nearest 10? 20

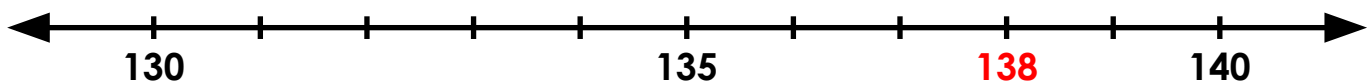
Find 34 on the number line and label it.



Is 34 closer to 30 or 40? 30

What is 34 rounded to the nearest 10? 30

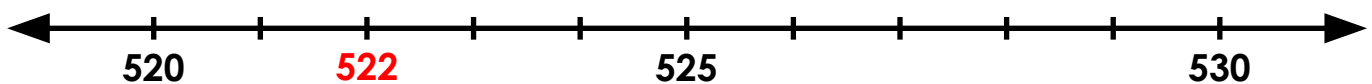
Find 138 on the number line and label it.



Is 138 closer to 130 or 140? 140

What is 138 rounded to the nearest 10? 140

Find 522 on the number line and label it.



Is 522 closer to 520 or 530? 520

What is 522 rounded to the nearest 10? 520