

Name: _____

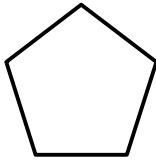
Solids and Polygons

Write the name of each shape.

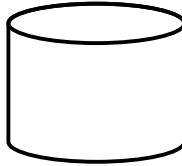
Word Bank
(You will not use all of the words)

octagon	pentagon	hexagon	rectangle
parallelogram	triangle	square	trapezoid
cylinder	rectangular prism	cube	sphere

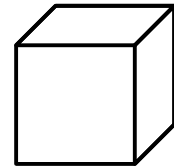
1.



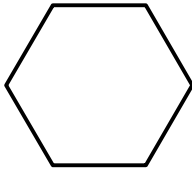
2.



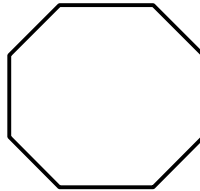
3.



4.



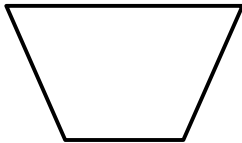
5.



6.



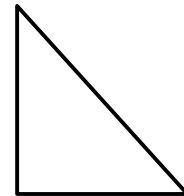
7.



8.



9.



ANSWER KEY

Solids and Polygons

Write the name of each shape.

Word Bank

(You will not use all of the words)

octagon

pentagon

hexagon

rectangle

parallelogram

triangle

square

trapezoid

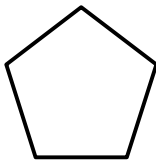
cylinder

rectangular prism

cube

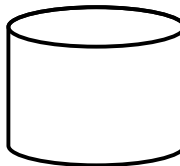
sphere

1.



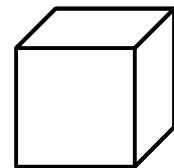
pentagon

2.



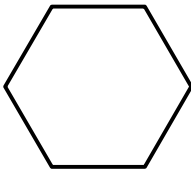
cylinder

3.



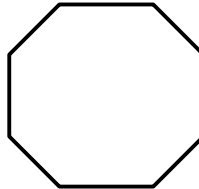
cube

4.



hexagon

5.



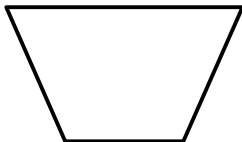
octagon

6.



rectangular prism

7.



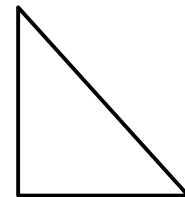
trapezoid

8.



parallelogram

9.



triangle