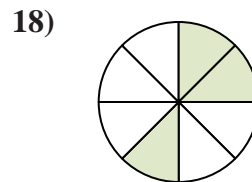
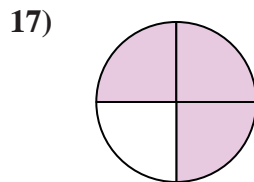
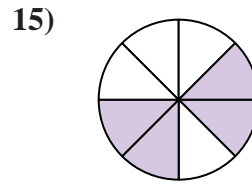

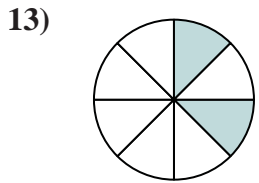
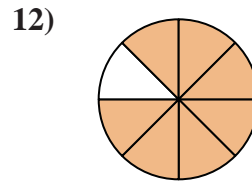
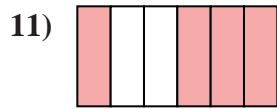
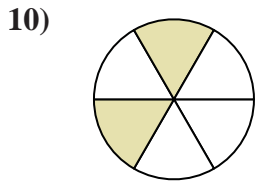
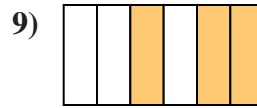
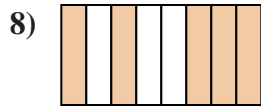
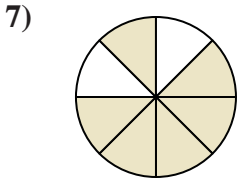
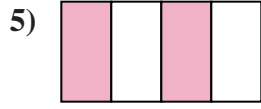
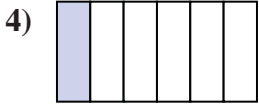
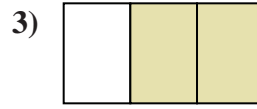

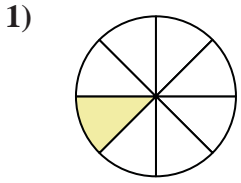




Write the shaded amount as a fraction of the whole amount.



Answers

1. _____

2. _____

3. _____

4. _____

5. _____

6. _____

7. _____

8. _____

9. _____

10. _____

11. _____

12. _____

13. _____

14. _____

15. _____

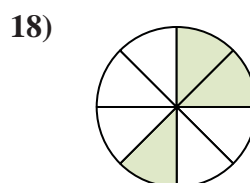
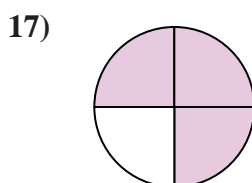

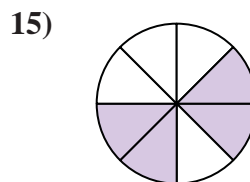
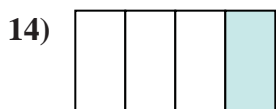
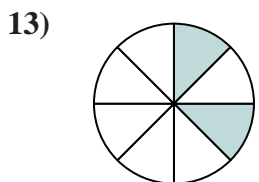
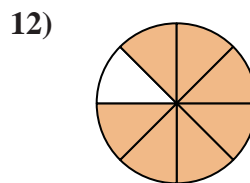
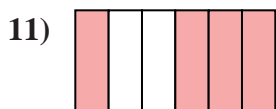
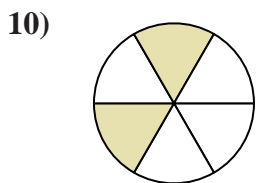
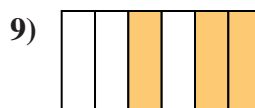
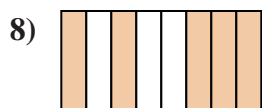
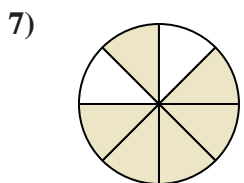
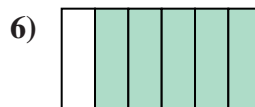
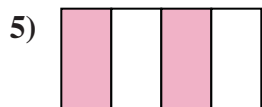
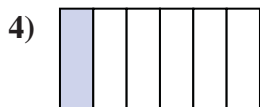


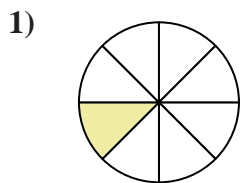
16. _____

17. _____

18. _____



Write the shaded amount as a fraction of the whole amount.



Answers

1. 1/8

2. 1/3

3. 2/3

4. 1/6

5. 2/4

6. 5/6

7. 6/8

8. 5/8

9. 3/6

10. 2/6

11. 4/6

12. 7/8

13. 2/8

14. 1/4

15. 4/8

16. 1/2

17. 3/4

18. 3/8