



Name: _____

Fractions of a Group


Complete the fraction equation for each picture.



$$\frac{1}{2} \text{ of } 6 = \underline{\hspace{2cm}}$$



$$\frac{1}{4} \text{ of } 4 = \underline{\hspace{2cm}}$$



$$\frac{1}{3} \text{ of } 9 = \underline{\hspace{2cm}}$$



$$\frac{1}{5} \text{ of } 5 = \underline{\hspace{2cm}}$$



$$\frac{1}{6} \text{ of } 12 = \underline{\hspace{2cm}}$$




$$\frac{1}{3} \text{ of } 6 = \underline{\hspace{2cm}}$$



$$\frac{1}{5} \text{ of } 15 = \underline{\hspace{2cm}}$$



$$\frac{1}{2} \text{ of } 4 = \underline{\hspace{2cm}}$$



$$\frac{1}{6} \text{ of } 6 = \underline{\hspace{2cm}}$$


j. Tony saw 6 birds in a tree. $\frac{1}{6}$ of them flew away. How many were left?

k. Bob got 8 presents for his birthday and opened $\frac{1}{2}$ of them. How many did he open?


ANSWER KEY

Fractions of a Group


Complete the fraction equation for each picture.



$$\frac{1}{2} \text{ of } 6 = \underline{3}$$



$$\frac{1}{4} \text{ of } 4 = \underline{1}$$



$$\frac{1}{3} \text{ of } 9 = \underline{3}$$



$$\frac{1}{5} \text{ of } 5 = \underline{1}$$



$$\frac{1}{6} \text{ of } 12 = \underline{2}$$




$$\frac{1}{3} \text{ of } 6 = \underline{2}$$



$$\frac{1}{3} \text{ of } 15 = \underline{5}$$



$$\frac{1}{2} \text{ of } 4 = \underline{2}$$



$$\frac{1}{6} \text{ of } 6 = \underline{1}$$

j. Tony saw 6 birds in a tree. $\frac{1}{6}$ of them flew away. How many were left?

5

k. Bob got 8 presents for his birthday and opened $\frac{1}{2}$ of them. How many did he open?

4