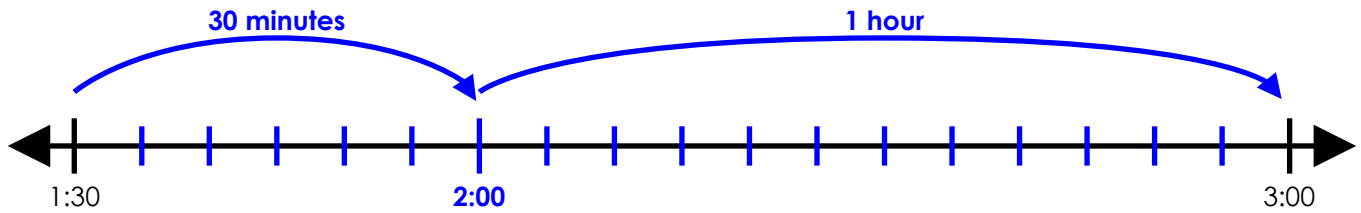


Name: _____

Elapsed Time Number Line

Start Time	End Time
1:30 pm	3:00 pm



elapsed time: 1 hour and 30 minutes

Use an elapsed time number line to calculate the amount of time that has passed.

a.

Start Time	End Time
5:00 pm	7:30 pm



elapsed time: _____

b.

Start Time	End Time
3:30 am	5:30 am



elapsed time: _____

c.

Start Time	End Time
11:00 pm	1:30 am



elapsed time: _____

d.

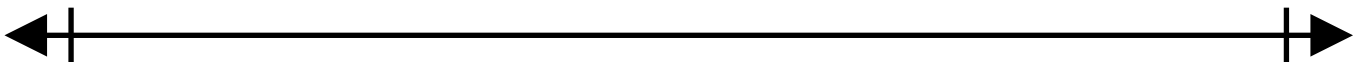
Start Time	End Time
2:30 am	6:30 am



elapsed time: _____

e.

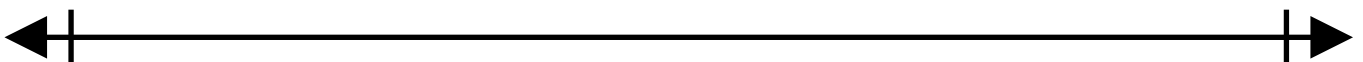
Start Time	End Time
9:00 am	12:30 pm



elapsed time: _____



Start Time	End Time
half past 7 am	half past 7 pm

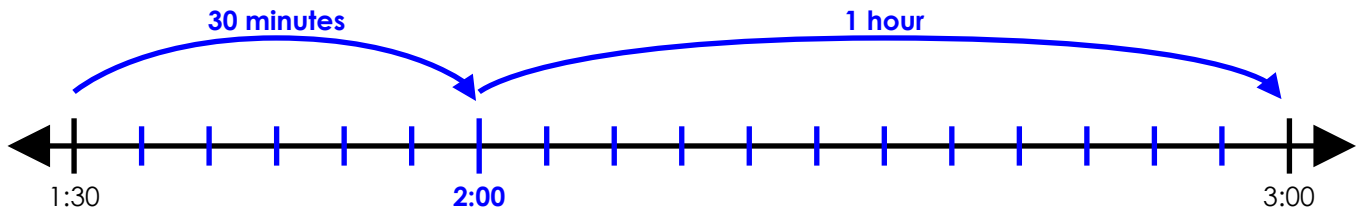


elapsed time: _____

ANSWER KEY

Elapsed Time Number Line

Start Time	End Time
1:30 pm	3:00 pm

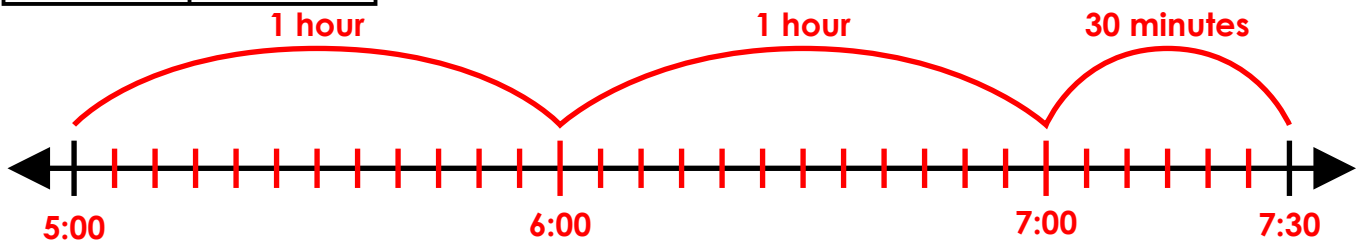


elapsed time: 1 hour and 30 minutes

Use an elapsed time number line to calculate the amount of time that has passed.

a.

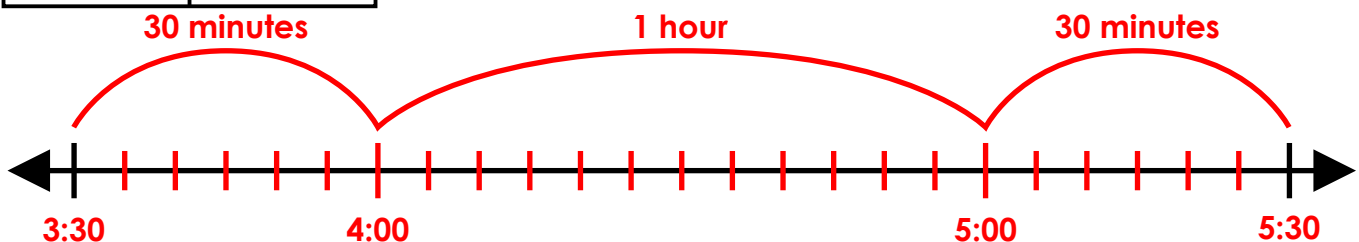
Start Time	End Time
5:00 pm	7:30 pm



elapsed time: 2 hours and 30 minutes

b.

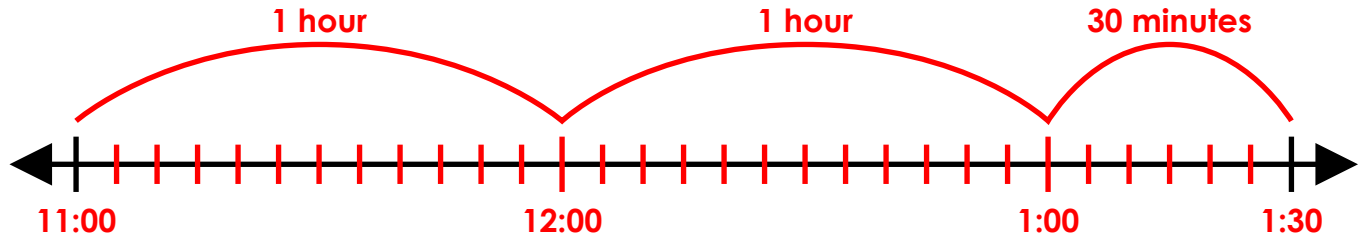
Start Time	End Time
3:30 am	5:30 am



elapsed time: 2 hours

c.

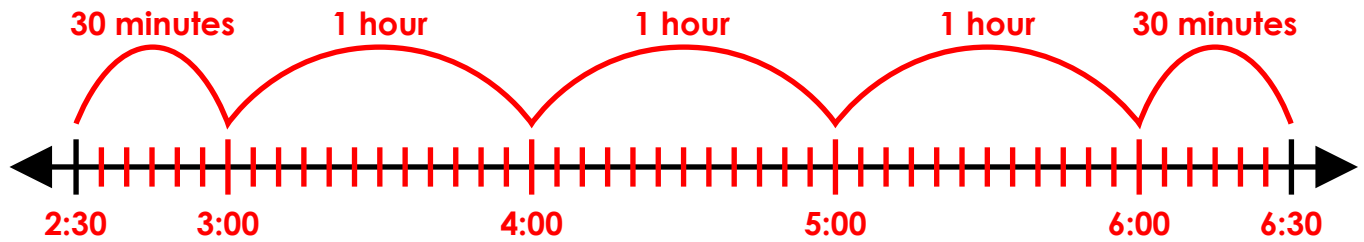
Start Time	End Time
11:00 pm	1:30 am



elapsed time: 2 hours and 30 minutes

d.

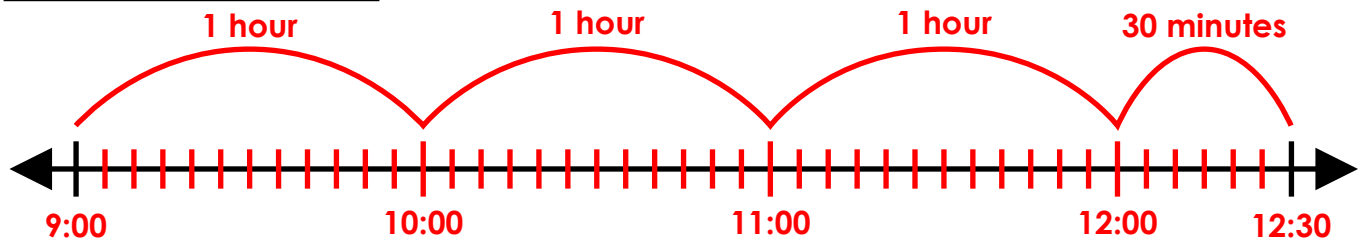
Start Time	End Time
2:30 am	6:30 am



elapsed time: 4 hours

e.

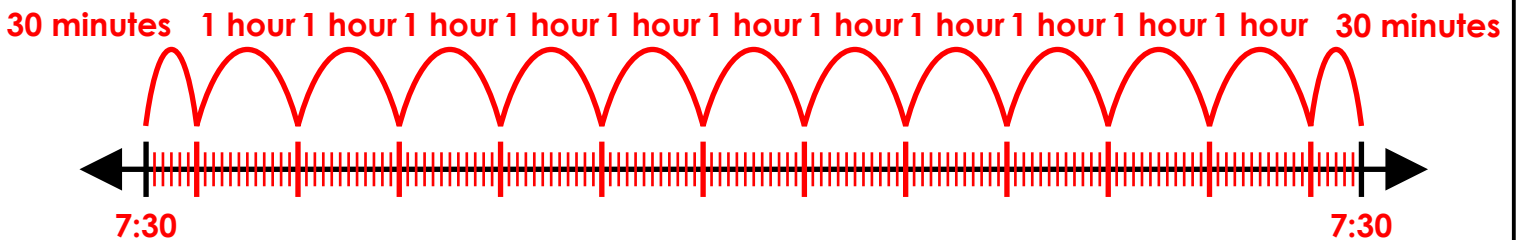
Start Time	End Time
9:00 am	12:30 pm



elapsed time: 3 hours and 30 minutes



Start Time	End Time
half past 7 am	half past 7 pm



elapsed time: 12 hours