

Lesson 4 Reteach

Quadrilaterals

A **quadrilateral** can be classified by its sides and angles.

A **square** has 4 right angles and 4 sides of equal length.



A **rectangle** has 4 right angles. Its opposite sides are equal in length.



In a **parallelogram**, both pairs of opposite sides are parallel and of equal length.



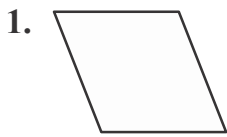
A **rhombus** has 4 sides of equal length, opposite sides are parallel, and opposite angles are the same.



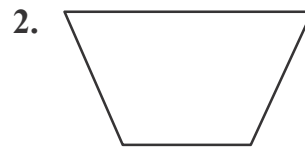
A **trapezoid** has only 1 pair of parallel sides.



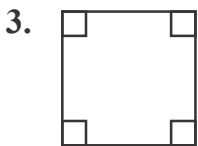
Identify each quadrilateral.



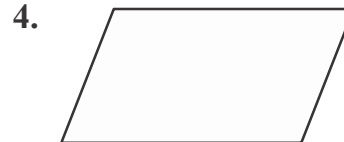
It has 4 sides of equal length.
It is a _____.



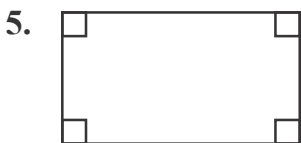
Only 1 pair of its sides is parallel.
It is a _____.



It has 4 right angles and 4 sides of equal length. It is a _____.



Both pairs of its opposite sides are parallel. It is a _____.



It has 4 right angles, and its opposite sides are equal in length.
It is a _____.