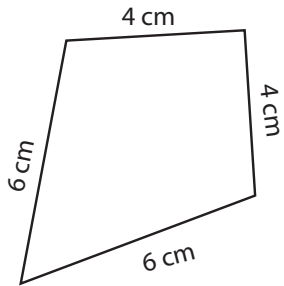


Quadrilateral-Perimeter

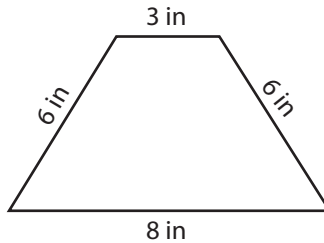
Find the perimeter of each quadrilateral.

1)



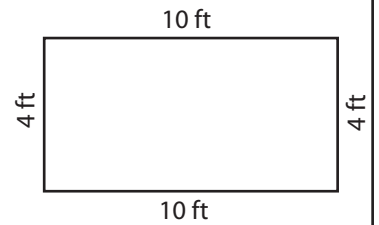
Perimeter = _____

2)



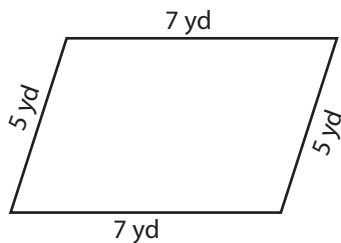
Perimeter = _____

3)



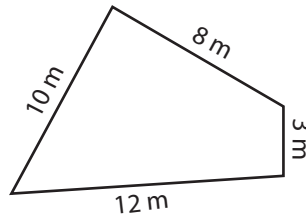
Perimeter = _____

4)



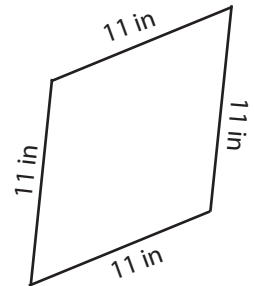
Perimeter = _____

5)



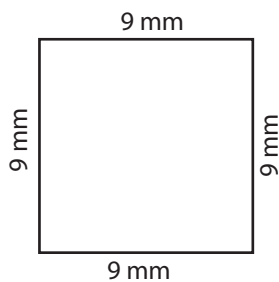
Perimeter = _____

6)



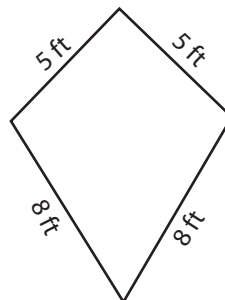
Perimeter = _____

7)



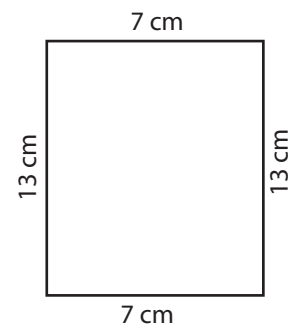
Perimeter = _____

8)



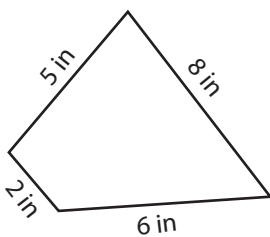
Perimeter = _____

9)



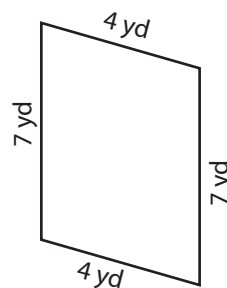
Perimeter = _____

10)



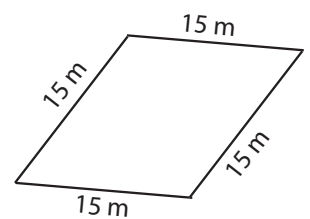
Perimeter = _____

11)



Perimeter = _____

12)

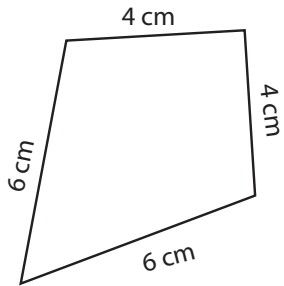


Perimeter = _____

Answer key

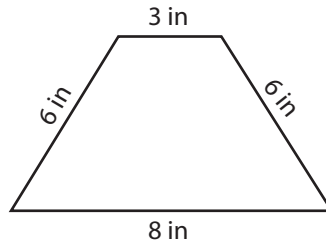
Find the perimeter of each quadrilateral.

1)



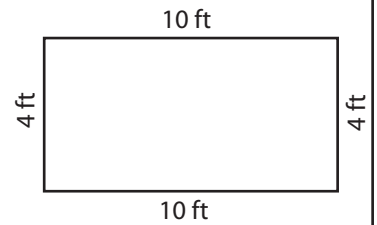
Perimeter = 20 cm

2)



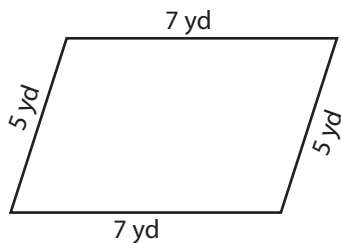
Perimeter = 23 in

3)



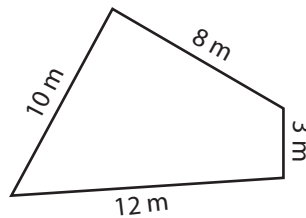
Perimeter = 28 ft

4)



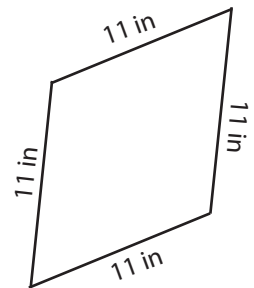
Perimeter = 24 yd

5)



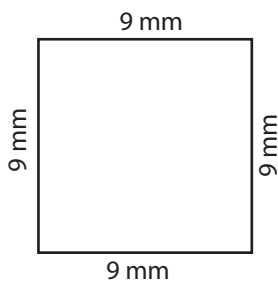
Perimeter = 33 m

6)



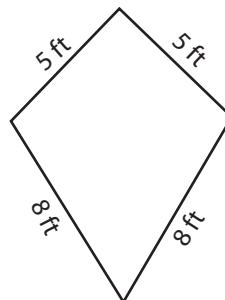
Perimeter = 44 in

7)



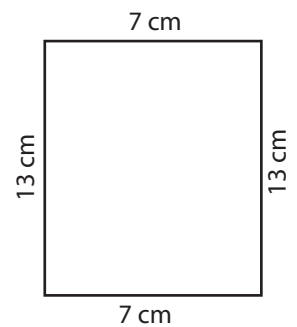
Perimeter = 36 mm

8)



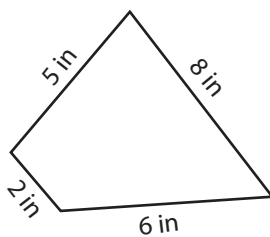
Perimeter = 26 ft

9)



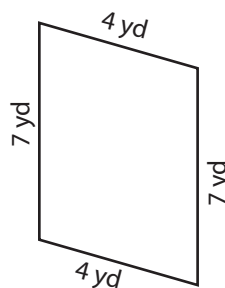
Perimeter = 40 cm

10)



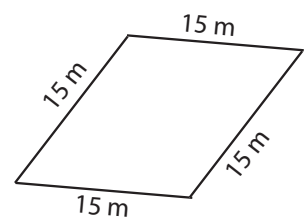
Perimeter = 21 in

11)



Perimeter = 22 yd

12)



Perimeter = 60 m