

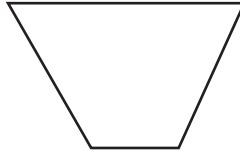
Identifying Quadrilateral

Write the name below each quadrilateral.

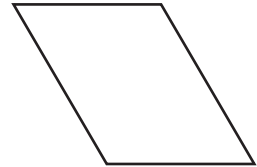
1)



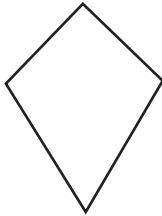
2)




3)



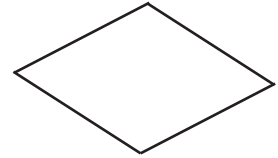
4)



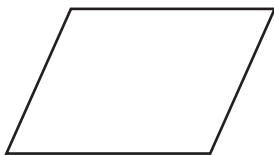
5)



6)




7)



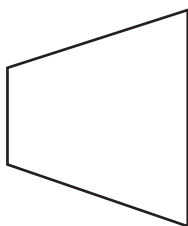
8)



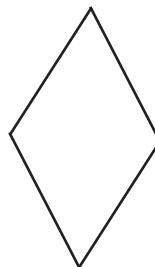
9)



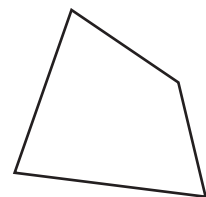
10)



11)



12)



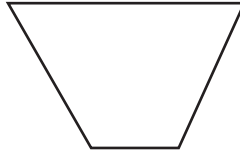
Answer Key

Write the name below each quadrilateral.

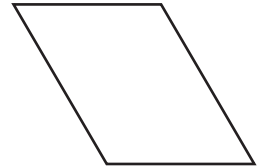
1)

**Rectangle**

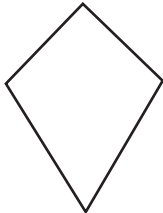
2)

**Trapezoid**

3)

**Parallelogram**

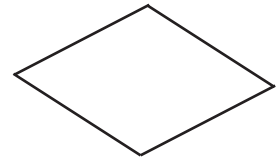
4)

**Kite**

5)

**Square**

6)

**Rhombus**


7)

**Parallelogram**

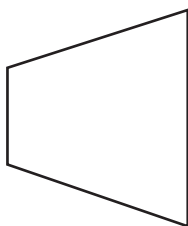
8)

**Rectangle**

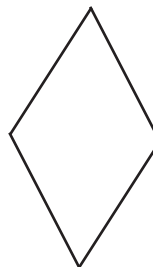
9)

**Kite**

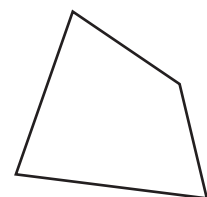
10)

**Trapezoid**

11)

**Rhombus**

12)

**Quadrilateral**