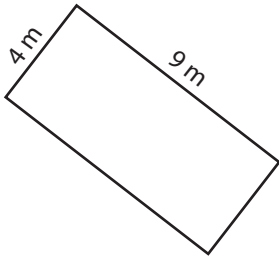


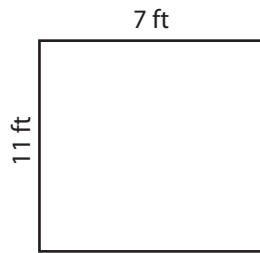
Rectangle-Area

Find the area of each rectangle.

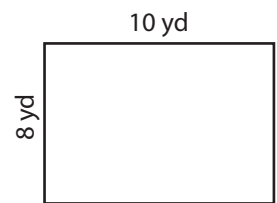
1)

Area =

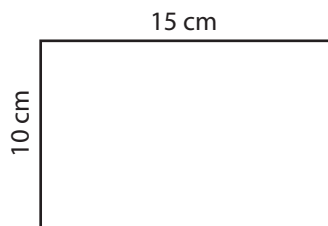
2)

Area =

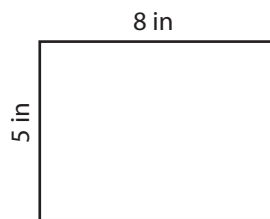
3)

Area =

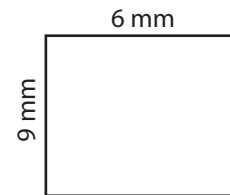
4)

Area =

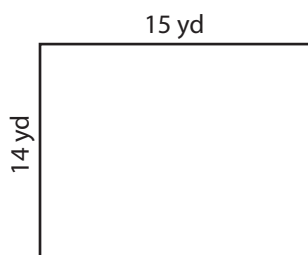
5)

Area =

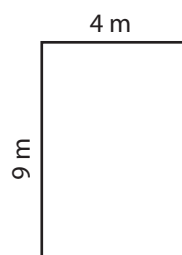
6)

Area =

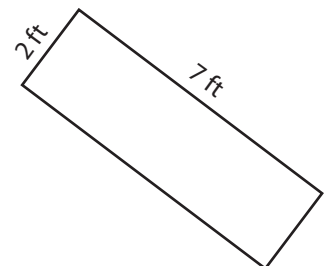
7)

Area =

8)

Area =

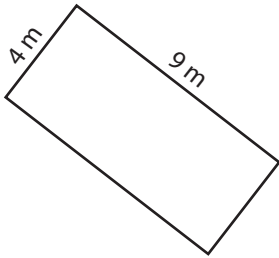
9)

Area =

Answer Key

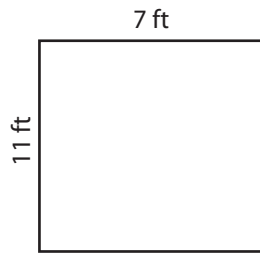
Find the area of each rectangle.

1)



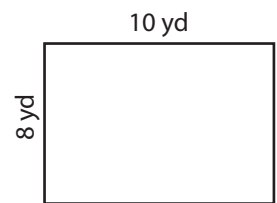
Area = **36 m²**

2)



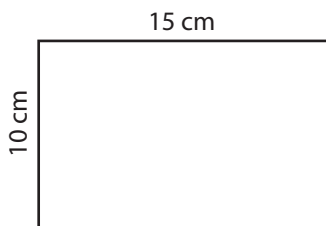
Area = **77 ft²**

3)



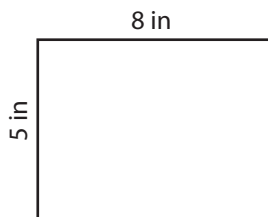
Area = **80 yd²**

4)



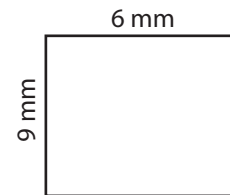
Area = **150 cm²**

5)



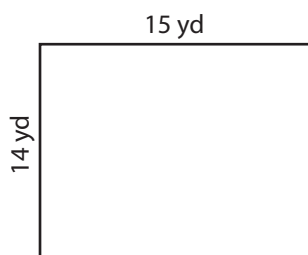
Area = **40 in²**

6)



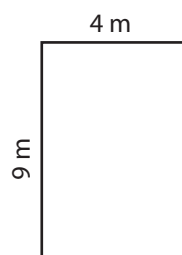
Area = **54 mm²**

7)



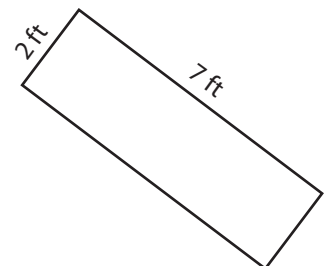
Area = **210 yd²**

8)



Area = **36 m²**

9)



Area = **14 ft²**