


Name: \_\_\_\_\_

# Division Word Problems

a.



Trina has a total of 32 crayons. How many boxes of crayons did she buy?

$$\underline{\hspace{2cm}} \div \underline{\hspace{2cm}} = \underline{\hspace{2cm}}$$

b.



A store has 72 t-shirts in all. How many boxes of t-shirts are there?

$$\underline{\hspace{2cm}} \div \underline{\hspace{2cm}} = \underline{\hspace{2cm}}$$

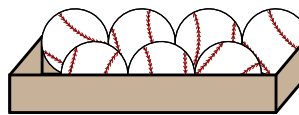
c.



Martin has 64 sticks of gum altogether. How many packs does he have?

$$\underline{\hspace{2cm}} \div \underline{\hspace{2cm}} = \underline{\hspace{2cm}}$$

d.



Coach Ramirez has a total of 35 baseballs. How many boxes of baseballs does he have?

$$\underline{\hspace{2cm}} \div \underline{\hspace{2cm}} = \underline{\hspace{2cm}}$$

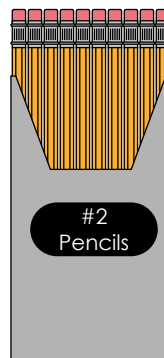
e.



Tanya brought 44 ounces of juice to the game. How many bottles did she bring?

$$\underline{\hspace{2cm}} \div \underline{\hspace{2cm}} = \underline{\hspace{2cm}}$$

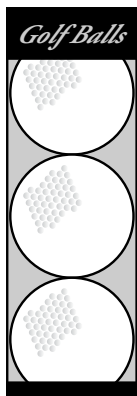
f.



Mr. Tobias handed out 30 pencils in all. How many boxes of pencils did he use?

$$\underline{\hspace{2cm}} \div \underline{\hspace{2cm}} = \underline{\hspace{2cm}}$$


g.



Tim used 21 golf balls in his last round of golf. How many boxes of golf balls did he use?

$$\underline{\hspace{2cm}} \div \underline{\hspace{2cm}} = \underline{\hspace{2cm}}$$

★




Sam has a total of 54 apples. How many boxes did she buy?

$$\underline{\hspace{2cm}} \div \underline{\hspace{2cm}} = \underline{\hspace{2cm}}$$

# ANSWER KEY

## Division Word Problems

a.



Trina has a total of 32 crayons. How many boxes of crayons did she buy?

$$\underline{32} \div \underline{8} = \underline{4}$$

b.



A store has 72 t-shirts in all. How many boxes of t-shirts are there?

$$\underline{72} \div \underline{12} = \underline{6}$$

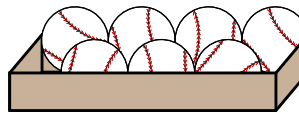
c.



Martin has 64 sticks of gum altogether. How many packs does he have?

$$\underline{64} \div \underline{8} = \underline{8}$$

d.



Coach Ramirez has a total of 35 baseballs. How many boxes of baseballs does he have?

$$\underline{35} \div \underline{7} = \underline{5}$$

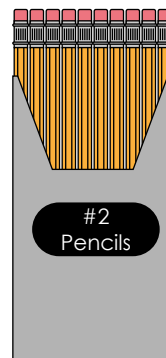
e.



Tanya brought 44 ounces of juice to the game. How many bottles did she bring?

$$\underline{44} \div \underline{11} = \underline{4}$$

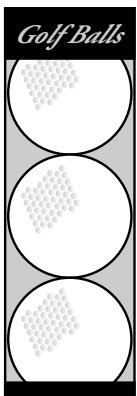
f.



Mr. Tobias handed out 30 pencils in all. How many boxes of pencils did he use?

$$\underline{30} \div \underline{10} = \underline{3}$$


g.



Tim used 21 golf balls in his last round of golf. How many boxes of golf balls did he use?

$$\underline{21} \div \underline{3} = \underline{7}$$

★



Sam has a total of 54 apples. How many boxes did she buy?

$$\underline{54} \div \underline{6} = \underline{9}$$