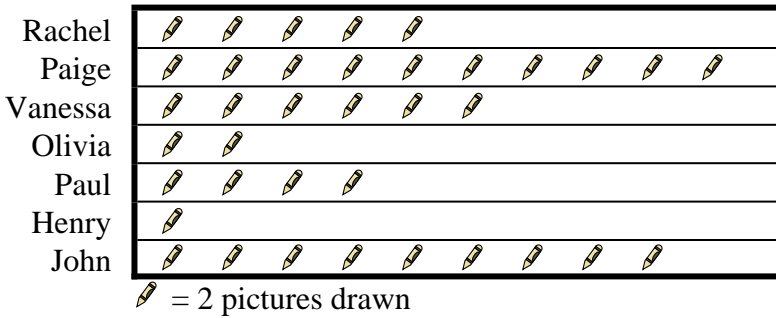




Solve each problem.

Several students were helping to decorate the school halls by drawing pictures to hang up. The pictograph below shows the number of pictures each student drew.

Pictures Drawn




- 1) Who drew the most pictures?
- 2) Who drew the fewest pictures?
- 3) Did Olivia or Vanessa draw more pictures?
- 4) How many pictures did Henry draw?
- 5) How many pictures did Paige draw?

Answers

1. _____
2. _____
3. _____
4. _____
5. _____
6. _____
7. _____
8. _____
9. _____
10. _____

Paul and his friends were trying to see who could catch the most bugs in a day. They recorded their information in the pictograph below.

Bug Catching Contest



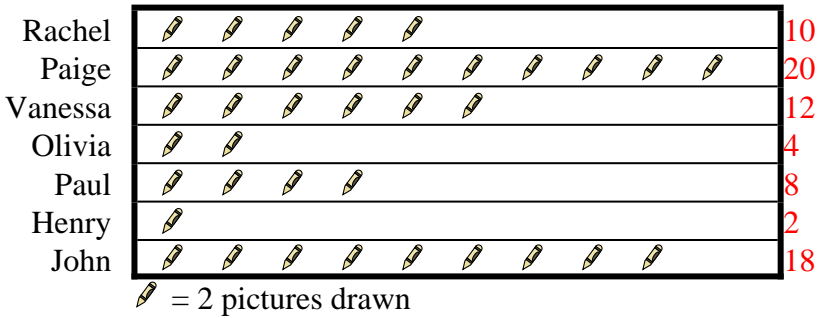
- 6) Who caught the greatest number of bugs?
- 7) Who caught the fewest number of bugs?
- 8) Who caught more bugs, John or Tom?
- 9) How many bugs did Billy catch?
- 10) How many bugs did Oliver catch?



Solve each problem.

Several students were helping to decorate the school halls by drawing pictures to hang up. The pictograph below shows the number of pictures each student drew.

Pictures Drawn




- Who drew the most pictures?
- Who drew the fewest pictures?
- Did Olivia or Vanessa draw more pictures?
- How many pictures did Henry draw?
- How many pictures did Paige draw?

Answers

- Paige
- Henry
- Vanessa
- 2
- 20
- Dave
- Paul
- Tom
- 40
- 48

Paul and his friends were trying to see who could catch the most bugs in a day. They recorded their information in the pictograph below.

Bug Catching Contest



- Who caught the greatest number of bugs?
- Who caught the fewest number of bugs?
- Who caught more bugs, John or Tom?
- How many bugs did Billy catch?
- How many bugs did Oliver catch?