

Am I Ready?

Practice

Find each sum.

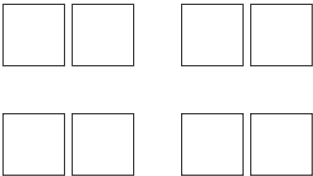
1. $3 + 3 + 3 + 3 + 3 =$ _____

2. $7 + 7 + 7 =$ _____

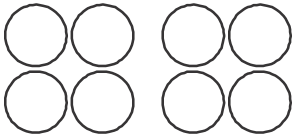
3. $6 + 6 + 6 + 6 + 6 =$ _____


4. $4 + 4 + 4 + 4 + 4 + 4 =$ _____

Write an addition sentence for each picture.

5. 

6. 

7. 

8. 

Solve. Use repeated addition.

9. Marina has 2 notebooks with 5 pages in each notebook. How many pages does she have in all?

10. Paulina drank 1 juice box during each of her soccer games on Saturday. She played 3 games. How many juice boxes did she drink?
