


Lesson 4 Reteach

Multiply by 4


Find 5×4 .

Draw a picture




number of rows	\times	number in each row	$=$	total
5		4		20


Use the picture to find the product.



$4 \times 4 =$ _____



$4 \times 5 =$ _____



$3 \times 4 =$ _____

Multiply.

4. $4 \times 7 =$ _____

5. $4 \times 4 =$ _____

6. $4 \times 9 =$ _____

7. $3 \times 4 =$ _____

8. $4 \times 2 =$ _____

9. $4 \times 1 =$ _____

10. $4 \times 6 =$ _____

11. $9 \times 4 =$ _____

12. $4 \times 8 =$ _____

13. $7 \times 4 =$ _____

14. $4 \times 9 =$ _____

15. $2 \times 4 =$ _____

16. $11 \times 4 =$ _____

17. $6 \times 4 =$ _____

18. $1 \times 4 =$ _____

19. $4 \times 5 =$ _____

20. $2 \times 4 =$ _____

21. $10 \times 4 =$ _____