

Lesson 4 Reteach

Multiply by 4


Find 5×4 .


Draw a picture.




number of rows		number in each row		total
5	×	4	=	20

Use the picture to find the product.

1.  $4 \times 4 = \underline{16}$

2.  $4 \times 5 = \underline{20}$

3.  $3 \times 4 = \underline{12}$

Multiply.

4. $4 \times 7 = \underline{28}$

5. $4 \times 4 = \underline{16}$

6. $4 \times 9 = \underline{36}$

7. $3 \times 4 = \underline{12}$

8. $4 \times 2 = \underline{8}$

9. $4 \times 1 = \underline{4}$

10. $4 \times 6 = \underline{24}$

11. $9 \times 4 = \underline{36}$

12. $4 \times 8 = \underline{32}$

13. $7 \times 4 = \underline{28}$

14. $4 \times 9 = \underline{36}$

15. $2 \times 4 = \underline{8}$

16. $8 \times 4 = \underline{32}$

17. $6 \times 4 = \underline{24}$

18. $1 \times 4 = \underline{4}$

19. $4 \times 5 = \underline{20}$

20. $2 \times 4 = \underline{8}$

21. $10 \times 4 = \underline{40}$