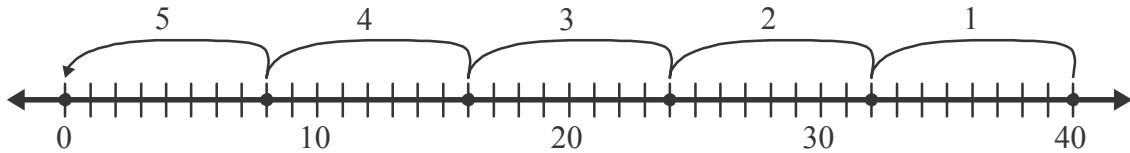


Lesson 6 Reteach

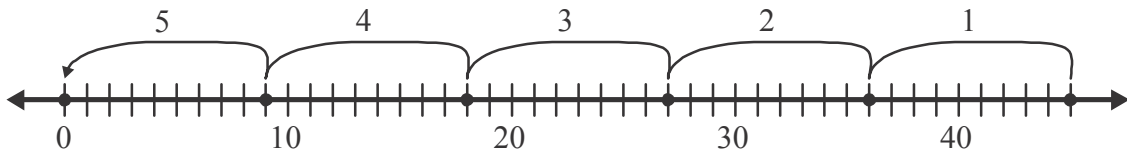
Divide by 8 and 9

Find $40 \div 8$.

Skip count to divide. Make 5 jumps of 8. So, $40 \div 8 = 5$.



Find $45 \div 9$. You make jumps of 9 each time. So, $45 \div 9 = 5$.



Skip count on the number line to find the answer.

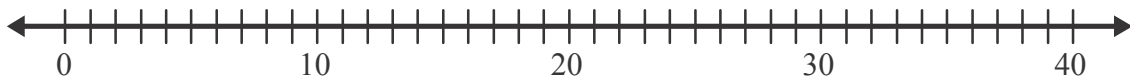
Draw arrows on the number line to show your work.

Then complete the number sentence.

1. $32 \div 8 =$ _____



2. $36 \div 9 =$ _____



Use related facts or a number line to divide.

3. $48 \div 8 =$ _____

4. $27 \div 9 =$ _____

5. $56 \div 8 =$ _____

6. $54 \div 9 =$ _____

7. $81 \div 9 =$ _____

8. $9 \div 9 =$ _____

9. $72 \div 8 =$ _____

10. $63 \div 9 =$ _____

11. $45 \div 9 =$ _____