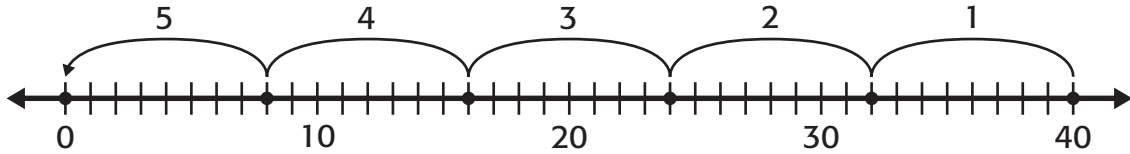


Lesson 6 Reteach

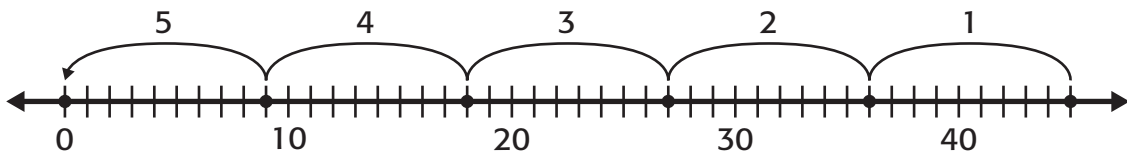
Divide by 8 and 9

Find $40 \div 8$.

Skip count to divide. Make 5 jumps of 8. So, $40 \div 8 = 5$.

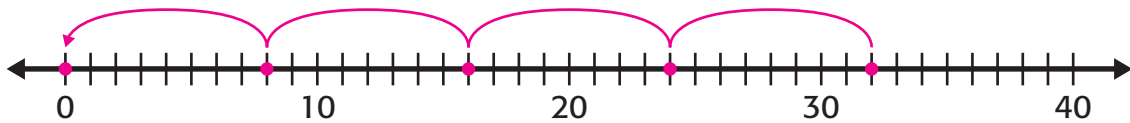


Find $45 \div 9$. You make jumps of 9 each time. So, $45 \div 9 = 5$.

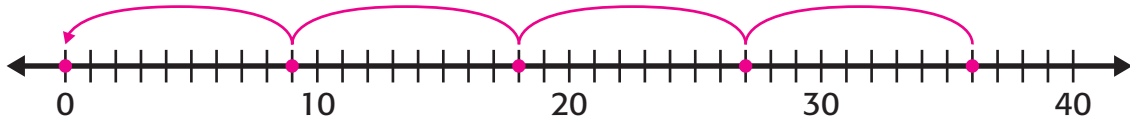


**Skip count on the number line to find the answer.
Draw arrows on the number line to show your work.
Then complete the number sentence.**

1. $32 \div 8 = \underline{4}$



2. $36 \div 9 = \underline{4}$



Use related facts or a number line to divide.

3. $48 \div 8 = \underline{6}$

4. $27 \div 9 = \underline{3}$

5. $56 \div 8 = \underline{7}$

6. $54 \div 9 = \underline{6}$

7. $81 \div 9 = \underline{9}$

8. $9 \div 9 = \underline{1}$

9. $72 \div 8 = \underline{9}$

10. $63 \div 9 = \underline{7}$

11. $45 \div 9 = \underline{5}$