


## Lesson 2 Reteach

### Multiply by 7




You can add on to a known fact to find a new fact.

Find  $7 \times 3$  by finding  $(6 \times 3) + (1 \times 3)$ .



7 groups of 3	=	6 groups of 3	plus	1 group of 3
$7 \times 3$	=	$6 \times 3$	+	$1 \times 3$
	=	18	+	3
	=	21		So, $7 \times 3 = 21$ .

Write a multiplication sentence for the picture.



\_\_\_\_\_

\_\_\_\_\_

\_\_\_\_\_

Multiply. Use models if needed.

4.  $3 \times 7 =$  \_\_\_\_\_

5.  $5 \times 7 =$  \_\_\_\_\_

6.  $7 \times 7 =$  \_\_\_\_\_

7.  $8 \times 7 =$  \_\_\_\_\_

8.  $7 \times 6 =$  \_\_\_\_\_

9.  $7 \times 9 =$  \_\_\_\_\_

10.  $9 \times 7 =$  \_\_\_\_\_

11.  $4 \times 7 =$  \_\_\_\_\_

12.  $7 \times 1 =$  \_\_\_\_\_

13.  $6 \times 7 =$  \_\_\_\_\_

14.  $3 \times 7 =$  \_\_\_\_\_

15.  $0 \times 7 =$  \_\_\_\_\_

16.  $7 \times 4 =$  \_\_\_\_\_

17.  $1 \times 7 =$  \_\_\_\_\_

18.  $2 \times 7 =$  \_\_\_\_\_