


Lesson 3 Reteach

Divide by 6 and 7

You can make groups to help you divide.

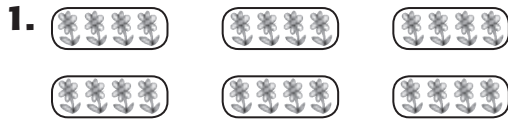
Suppose you have 28 wildflowers.
 You have 7 vases to put them in.
 How many wildflowers will you have in each vase?



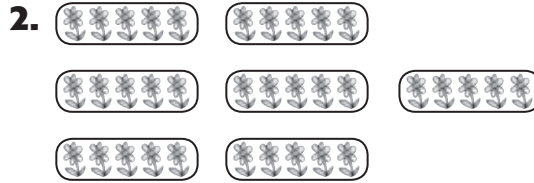
Number in All	Number of Groups	Number in Each Group
28	7	4

So, $28 \div 7 = 4$.

Complete the division sentence for each picture.



$24 \div 6 = \underline{\hspace{2cm}}$



$35 \div 7 = \underline{\hspace{2cm}}$

Use models or repeated subtraction to divide.

3. $54 \div 6 = \underline{\hspace{2cm}}$ 4. $48 \div 6 = \underline{\hspace{2cm}}$ 5. $56 \div 7 = \underline{\hspace{2cm}}$

6. $42 \div 6 = \underline{\hspace{2cm}}$ 7. $28 \div 7 = \underline{\hspace{2cm}}$ 8. $18 \div 6 = \underline{\hspace{2cm}}$

9. $30 \div 6 = \underline{\hspace{2cm}}$ 10. $12 \div 6 = \underline{\hspace{2cm}}$ 11. $42 \div 7 = \underline{\hspace{2cm}}$

12. $6 \overline{)24}$

13. $7 \overline{)21}$

14. $7 \overline{)63}$

15. $7 \overline{)35}$

16. $6 \overline{)36}$

17. $7 \overline{)49}$