


Lesson 3 Reteach

Divide by 6 and 7

You can make groups to help you divide.

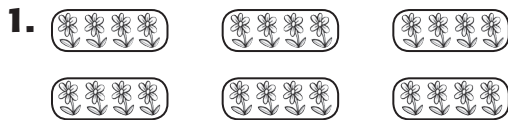
Suppose you have 28 wildflowers.
 You have 7 vases to put them in.
 How many wildflowers will you have in each vase?



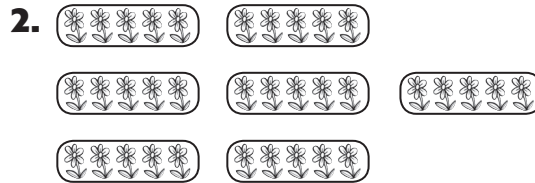
Number in All	Number of Groups	Number in Each Group
28	7	4

So, $28 \div 7 = 4$.

Complete the division sentence for each picture.



$24 \div 6 = \underline{4}$



$35 \div 7 = \underline{5}$

Use models or repeated subtraction to divide.

3. $54 \div 6 = \underline{9}$

4. $48 \div 6 = \underline{8}$

5. $56 \div 7 = \underline{8}$

6. $42 \div 6 = \underline{7}$

7. $28 \div 7 = \underline{4}$

8. $18 \div 6 = \underline{3}$

9. $30 \div 6 = \underline{5}$

10. $12 \div 6 = \underline{2}$

11. $42 \div 7 = \underline{6}$

12. $6 \overline{)24}$
 $\underline{4}$

13. $7 \overline{)21}$
 $\underline{3}$

14. $7 \overline{)63}$
 $\underline{9}$

15. $7 \overline{)35}$
 $\underline{5}$

16. $6 \overline{)36}$
 $\underline{6}$

17. $7 \overline{)49}$
 $\underline{7}$