

MY Homework

Lesson 5

Tell Time to the Minute

Homework Helper



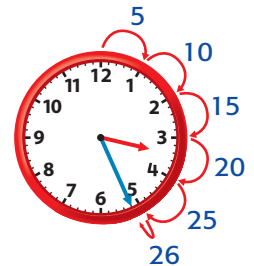
Need help? connectED.mcgraw-hill.com

What time is shown on the clock?



1 Find the hour.

The hour hand is past the 3, but has not reached the 4.
The hour is 3.



2 Count the minutes.

Count by 5s first. Then count each additional minute.
5, 10, 15, 20, 25, 26
The minutes are 26.

Read: 3:26

Write: three twenty-six or twenty-six minutes after three

Practice


Circle the correct time shown on each digital or analog clock.

1.



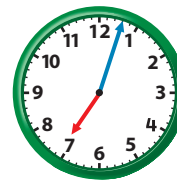
6:35 7:35

2.



1:10 11:11

3.



7:03 7:05

4.



2:40 5:40

5.



4:50 5:50

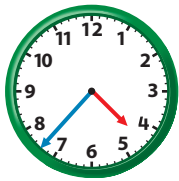
6.



3:22 3:27

Write the time shown on each clock in numbers and words.

7.



Read: _____

Write: _____

8.



Read: _____

Write: _____



Problem Solving

9. Diane's plane is due to arrive when the hour hand is just past the 3 and the minute hand is on the 4. What time should the plane arrive?

10. Mathematical PRACTICE 7 Identify Structure Clark was born when the hour hand was between 12 and 1 and the minute hand was on 11. What time was he born?

Vocabulary Check



Match each word or group of words to its meaning.

- | | |
|-------------------|--|
| 11. analog clock | • 60 seconds |
| 12. digital clock | • a clock that shows the time with numerals and a colon |
| 13. minute | • 60 minutes |
| 14. hour | • a clock that shows the time with minute and hour hands |

Test Practice

15. Look where the minute hand is pointing. How many minutes are after the hour?

- | | |
|----------------|----------------|
| (A) 25 minutes | (C) 35 minutes |
| (B) 33 minutes | (D) 38 minutes |

