
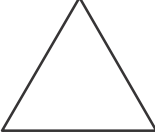
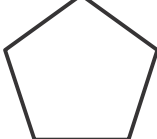
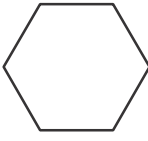
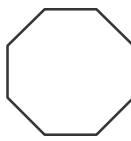
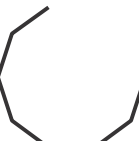


## Lesson 2 Reteach

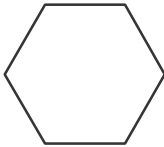
### *Polygons*

A polygon is a closed two-dimensional figure that has three or more straight sides.

 <b>quadrilateral</b> 4 sides 4 angles	 <b>triangle</b> 3 sides 3 angles	 <b>pentagon</b> 5 sides 5 angles
 <b>hexagon</b> 6 sides 6 angles	 <b>octagon</b> 8 sides 8 angles	 <b>not a polygon</b> The figure is not closed.

Describe and identify each figure.

1.

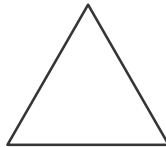



---

---

---

2.

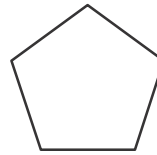



---

---

---

3.




---

---

---

4.

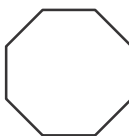



---

---

---

5.




---

---

---

6.




---

---

---