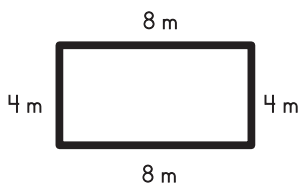


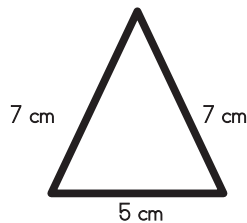
Name: _____

Perimeter

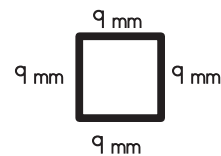
Find the perimeter of each polygon.



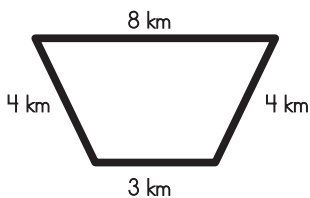
Perimeter = _____



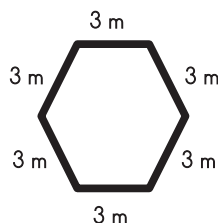
Perimeter = _____



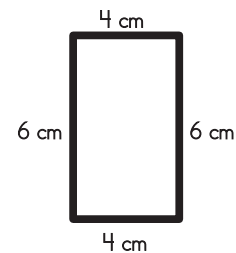
Perimeter = _____



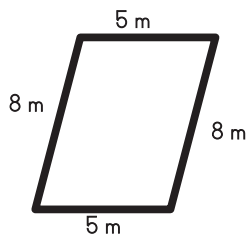
Perimeter = _____



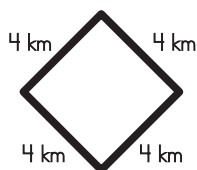
Perimeter = _____



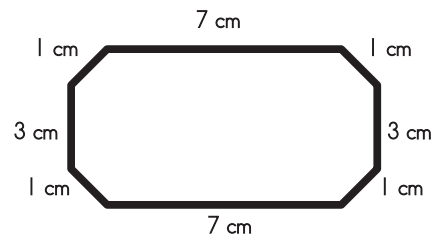
Perimeter = _____



Perimeter = _____



Perimeter = _____



Perimeter = _____

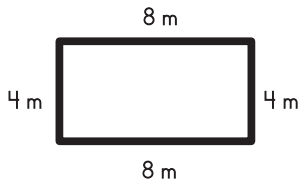
Bonus Box

Write the names of the polygons pictured above.

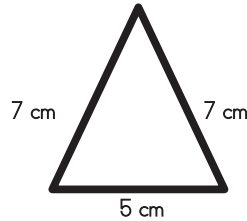
Name: _____

Perimeter – ANSWER KEY

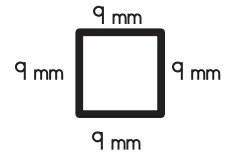
Find the perimeter of each polygon.



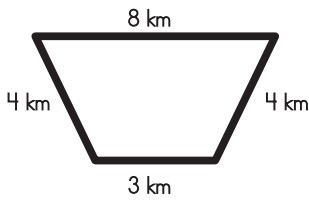
Perimeter = 24 m



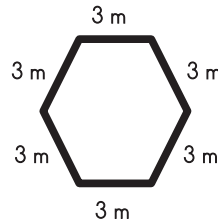
Perimeter = 19 cm



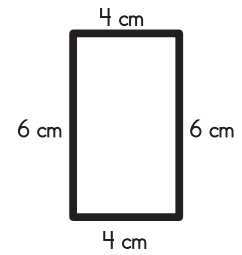
Perimeter = 36 mm



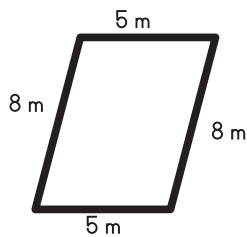
Perimeter = 19 km



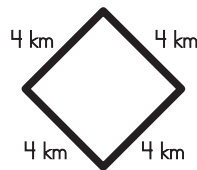
Perimeter = 18 m



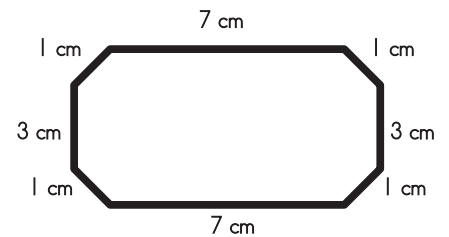
Perimeter = 20 cm



Perimeter = 26 m



Perimeter = 16 km



Perimeter = 24 cm

Bonus Box
Write the names of the polygons pictured above.

Answer to bonus box: rectangle triangle square
 trapezoid hexagon rectangle
 parallelogram diamond or square octagon