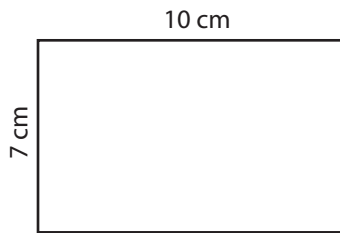


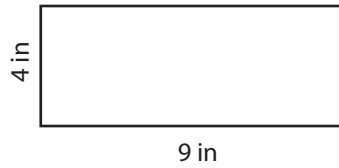
Rectangle-Area

Find the area of each rectangle.

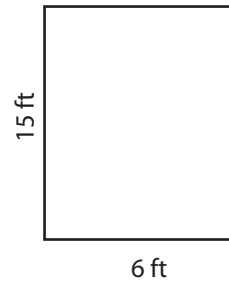
1)

Area =

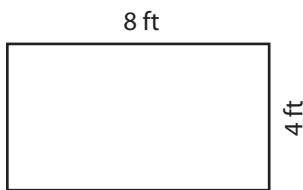
2)

Area =

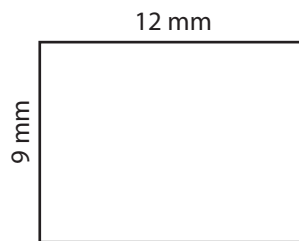
3)

Area =

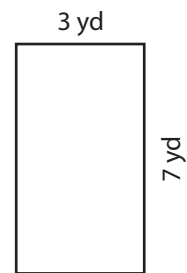
4)

Area =

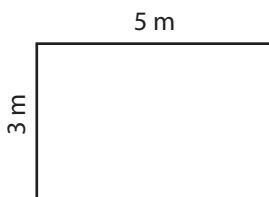
5)

Area =

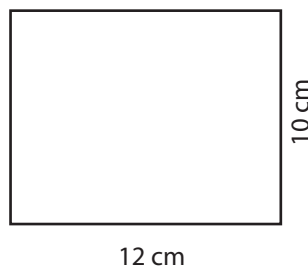
6)

Area =

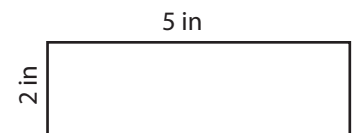
7)

Area =

8)

Area =

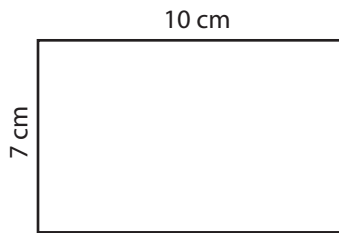
9)

Area =

Answer key

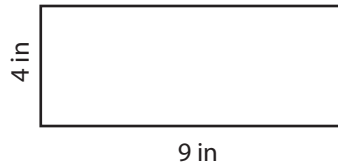
Find the area of each rectangle.

1)



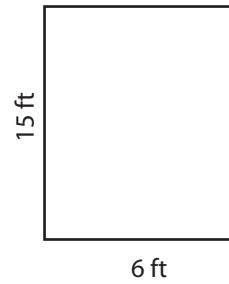
Area = **70 cm²**

2)



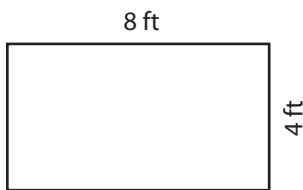
Area = **36 in²**

3)



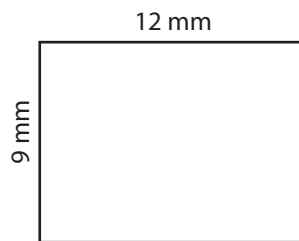
Area = **90 ft²**

4)



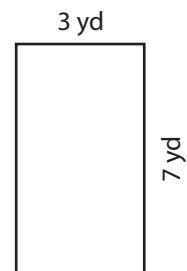
Area = **32 ft²**

5)



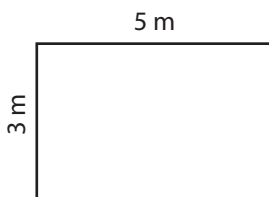
Area = **108 mm²**

6)



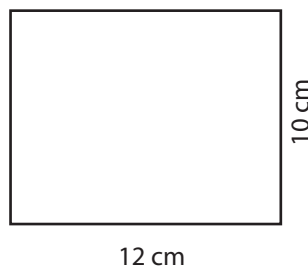
Area = **21 yd²**

7)



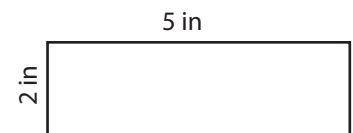
Area = **15 m²**

8)



Area = **120 cm²**

9)



Area = **10 in²**