


Fraction in a group


Name _____

Date _____


1. What fraction of the shapes are oval ?



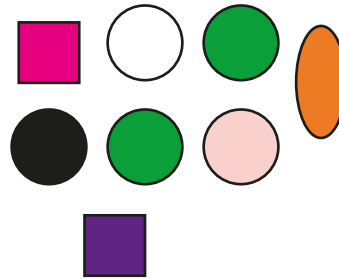
2. What fraction of the shapes are hexagons ?




3. What fraction of the shapes are circles ?



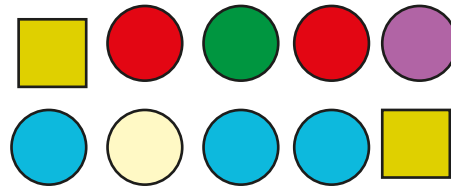
4. What fraction of the shapes are squares ?



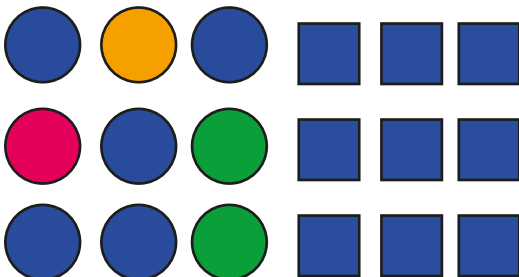
5. What fraction of the shapes are stars ?



6. What fraction of the shapes are circles ?



7. What fraction of the shapes are squares ?



8. What fraction of the shapes are triangles ?

