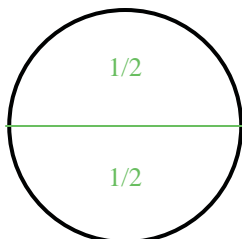





**Partition and label each shape.**


**Ex)** Split the shape into 2 equal parts and label each part.




**1)** Split the shape into 8 equal parts and label each part.




**2)** Split the shape into 3 equal parts and label each part.



**3)** Split the shape into 6 equal parts and label each part.




**4)** Split the shape into 4 equal parts and label each part.




**5)** Split the shape into 6 equal parts and label each part.




**6)** Split the shape into 8 equal parts and label each part.



**7)** Split the shape into 2 equal parts and label each part.



**8)** Split the shape into 4 equal parts and label each part.



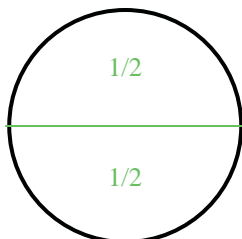
**9)** Split the shape into 3 equal parts and label each part.



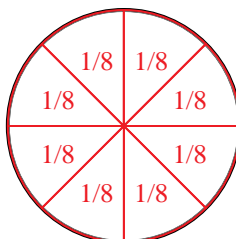


**Partition and label each shape.**

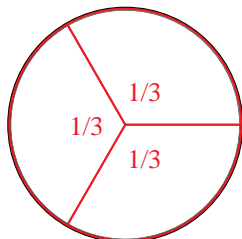
Ex) Split the shape into 2 equal parts and label each part.



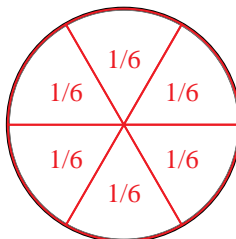
1) Split the shape into 8 equal parts and label each part.



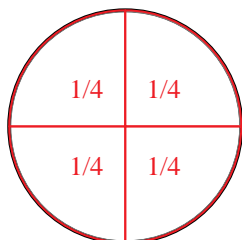
2) Split the shape into 3 equal parts and label each part.




3) Split the shape into 6 equal parts and label each part.




4) Split the shape into 4 equal parts and label each part.




5) Split the shape into 6 equal parts and label each part.




6) Split the shape into 8 equal parts and label each part.



7) Split the shape into 2 equal parts and label each part.



8) Split the shape into 4 equal parts and label each part.



9) Split the shape into 3 equal parts and label each part.

