



Name: _____

The Cupcake Bakery

The Cupcake Bakery makes cupcakes and ships them off to supermarkets across the country. The pictograph below shows how many cupcakes they bake each day. Use the information from the graph to answer the questions.

Number of Cupcakes Baked



 = 100 cupcakes


1. How many cupcakes were baked on Monday? **1.** _____
2. Were more cupcakes baked on Monday or Friday? **2.** _____
3. On which day were the fewest cupcakes baked? **3.** _____
4. How many cupcakes were baked on Tuesday and Wednesday combined? **4.** _____
5. How many more cupcakes were baked on Tuesday than Thursday? **5.** _____
6. How many more cupcakes were baked on Friday than Wednesday? **6.** _____
7. The Cupcake Bakery only makes two kinds of cupcakes: chocolate and white. On Friday, they baked 200 white cupcakes. How many chocolate cupcakes did they bake? **7.** _____
8. On Wednesday, the bakery made 100 chocolate cupcakes. How many white cupcakes did they make? **8.** _____

ANSWER KEY

The Cupcake Bakery

The Cupcake Bakery makes cupcakes and ships them off to supermarkets across the country. The pictograph below shows how many cupcakes they bake each day. Use the information from the graph to answer the questions.

Number of Cupcakes Baked



1. How many cupcakes were baked on Monday? 1. **750**
2. Were more cupcakes baked on Monday or Friday? 2. **Monday**
3. On which day were the fewest cupcakes baked? 3. **Wednesday**
4. How many cupcakes were baked on Tuesday and Wednesday combined? 4. **950**
5. How many more cupcakes were baked on Tuesday than Thursday? 5. **150**
6. How many more cupcakes were baked on Friday than Wednesday? 6. **250**
7. The Cupcake Bakery only makes two kinds of cupcakes: chocolate and white. On Friday, they baked 200 white cupcakes. How many chocolate cupcakes did they bake? 7. **400**
8. On Wednesday, the bakery made 100 chocolate cupcakes. How many white cupcakes did they make? 8. **250**