



Determine which letter best represents the weight.

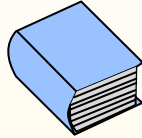
Gram (g)

A gram is about the weight of a paperclip.



Kilogram (kg)

A kilogram is about the weight of a thick book.




Remember:

Kilo means 1,000. So a kilogram is 1,000 grams.

1 Kilogram is also about the same weight as 2 pounds.

Answers

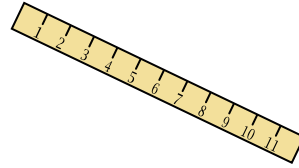
1. _____
2. _____
3. _____
4. _____
5. _____
6. _____
7. _____
8. _____
9. _____




- 1) Adult Horse
- A. 400 grams
 - B. 400 kilograms
 - C. 30 grams
 - D. 30 kilograms



- 2) Gallon of Milk
- A. 1 gram
 - B. 500 grams
 - C. 4 Kilograms
 - D. 30 kilograms



- 3) Ruler
- A. 1 gram
 - B. 999 grams
 - C. 20 grams
 - D. 30 kilograms



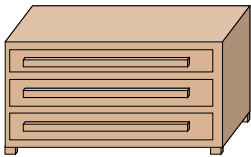
- 4) Lawn Mower
- A. 500 grams
 - B. 100 kilograms
 - C. 200 grams
 - D. 22 kilograms



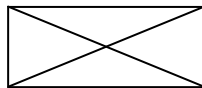
- 5) Frog
- A. 5,000 kilograms
 - B. 5,000 grams
 - C. 30 kilograms
 - D. 30 grams



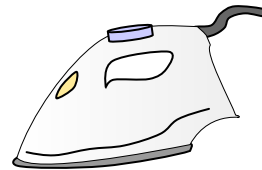
- 6) Baseball Cap
- A. 85 grams
 - B. 5 kilograms
 - C. 3 Grams
 - D. 200 Kilograms



- 7) Dresser
- A. 350 grams
 - B. 70 kilograms
 - C. 20 grams
 - D. 500 kilograms



- 8) Envelope
- A. 30 grams
 - B. 1 gram
 - C. 200 Kilograms
 - D. 675 grams



- 9) Clothes Iron
- A. 100 grams
 - B. 15 kilograms
 - C. 2 kilograms
 - D. 15 grams



Determine which letter best represents the weight.

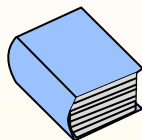
Gram (g)

A gram is about the weight of a paperclip.



Kilogram (kg)

A kilogram is about the weight of a thick book.




Remember:

Kilo means 1,000. So a kilogram is 1,000 grams.

1 Kilogram is also about the same weight as 2 pounds.

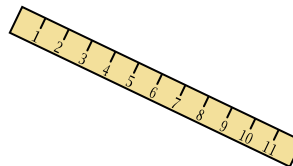
Answers




- 1) Adult Horse
 - A. 400 grams
 - B. 400 kilograms
 - C. 30 grams
 - D. 30 kilograms



- 2) Gallon of Milk
 - A. 1 gram
 - B. 500 grams
 - C. 4 Kilograms
 - D. 30 kilograms



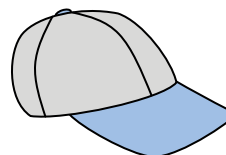
- 3) Ruler
 - A. 1 gram
 - B. 999 grams
 - C. 20 grams
 - D. 30 kilograms



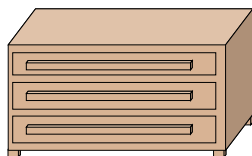
- 4) Lawn Mower
 - A. 500 grams
 - B. 100 kilograms
 - C. 200 grams
 - D. 22 kilograms



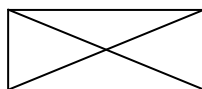
- 5) Frog
 - A. 5,000 kilograms
 - B. 5,000 grams
 - C. 30 kilograms
 - D. 30 grams




- 6) Baseball Cap
 - A. 85 grams
 - B. 5 kilograms
 - C. 3 Grams
 - D. 200 Kilograms



- 7) Dresser
 - A. 350 grams
 - B. 70 kilograms
 - C. 20 grams
 - D. 500 kilograms



- 8) Envelope
 - A. 30 grams
 - B. 1 gram
 - C. 200 Kilograms
 - D. 675 grams



- 9) Clothes Iron
 - A. 100 grams
 - B. 15 kilograms
 - C. 2 kilograms
 - D. 15 grams

- 1. **B**
- 2. **C**
- 3. **C**
- 4. **D**
- 5. **D**
- 6. **A**
- 7. **B**
- 8. **B**
- 9. **C**