

Name:

Weekly Homework Sheet Q1:1

Date:

Monday**Tuesday****Wednesday****Thursday****Place Value Chart**

Thousands	Hundreds	Tens	Ones

What is the place value of the underlined digit?

1,426

What is the place value of the underlined digit?

2,438

What is the place value of the underlined digit?

4,289

What is the place value of the underlined digit?

3,813

Write the number in expanded form.

47

Write the number in expanded form.

267

Write the number in expanded form.

418

Write the number in expanded form.

307

Circle the number with the GREATEST value.

24 83 42 67

Circle the number with the LEAST value.

24 83 42 67

Order the numbers from LEAST to GREATEST.

268 203 287

Order the numbers from GREATEST to LEAST.

375 329 403

Draw a number line from 0 to 100 (counting by 10's). Place the following digits on the number line in their correct location. **28, 37, 95, 77, 64, 8, 16, 51**Write 5 equations where the **sum** is equal to 10.
(ex. $10+0=10$)

- 1.
- 2.
- 3.
- 4.
- 5.

Write 5 equations where the **sum** is equal to 9.

- 1.
- 2.
- 3.
- 4.
- 5.

Write 5 equations where the **sum** is equal to 8.

- 1.
- 2.
- 3.
- 4.
- 5.

Write 5 equations where the **sum** is equal to 15.

- 1.
- 2.
- 3.
- 4.
- 5.

Find the Sum.

$$\begin{array}{r} 32 \\ + 28 \\ \hline \end{array}$$

Find the Sum.

$$\begin{array}{r} 98 \\ + 33 \\ \hline \end{array}$$

Find the Sum.

$$\begin{array}{r} 47 \\ + 24 \\ \hline \end{array}$$

Find the Sum.

$$\begin{array}{r} 75 \\ + 47 \\ \hline \end{array}$$

Find the Difference.

$$\begin{array}{r} 56 \\ - 34 \\ \hline \end{array}$$

Find the Difference.

$$\begin{array}{r} 81 \\ - 37 \\ \hline \end{array}$$

Find the Difference.

$$\begin{array}{r} 43 \\ - 16 \\ \hline \end{array}$$


Find the Difference.

$$\begin{array}{r} 74 \\ - 35 \\ \hline \end{array}$$

Is 33 closer to 30 or 40?




Round 84 to the nearest ten.



Round 128 to the nearest ten.



Round 375 to the nearest ten.




Is 76 closer to 70 or 80?



Round 47 to the nearest ten.



Round 195 to the nearest ten.



Round 644 to the nearest ten.

