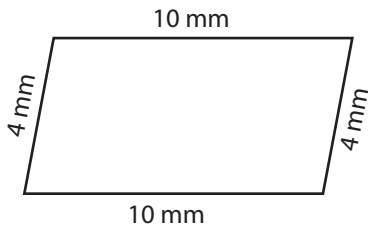


Quadrilateral-Perimeter

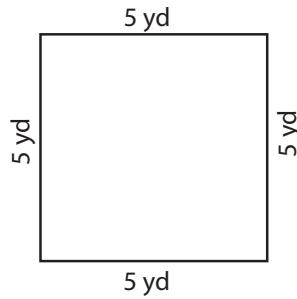
Find the perimeter of each quadrilateral.

1)



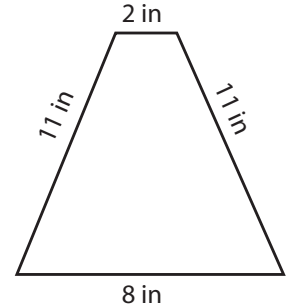
Perimeter = _____

2)



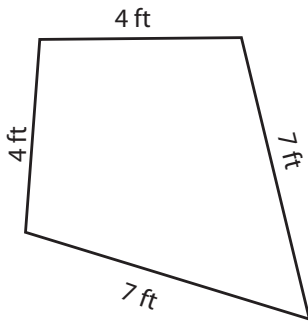
Perimeter = _____

3)



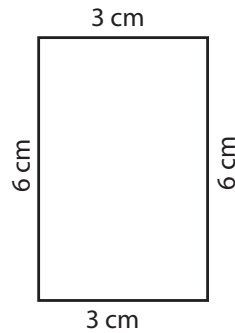
Perimeter = _____

4)



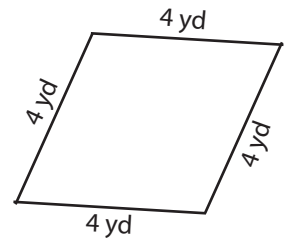
Perimeter = _____

5)



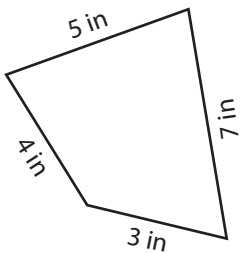
Perimeter = _____

6)



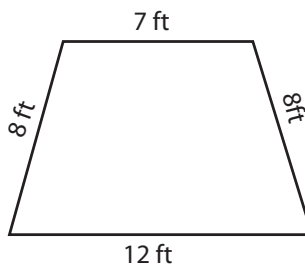
Perimeter = _____

7)



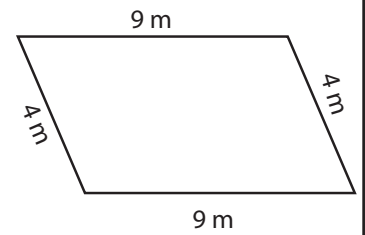
Perimeter = _____

8)



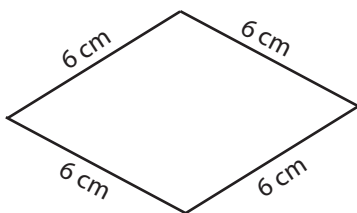
Perimeter = _____

9)



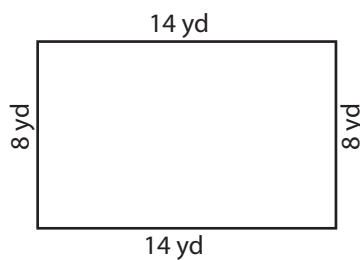
Perimeter = _____

10)



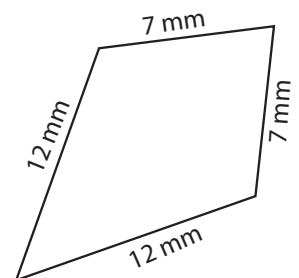
Perimeter = _____

11)



Perimeter = _____

12)

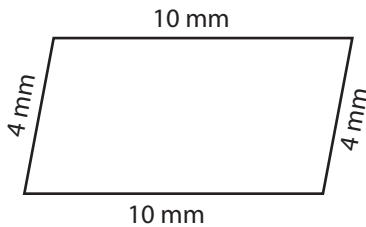


Perimeter = _____

Answer key

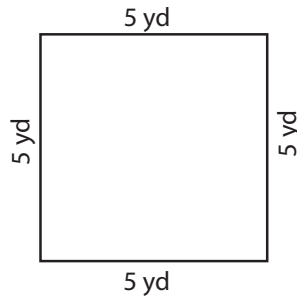
Find the perimeter of each quadrilateral.

1)



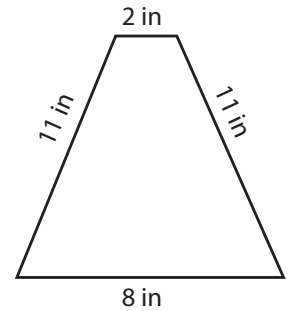
Perimeter = 28 mm

2)



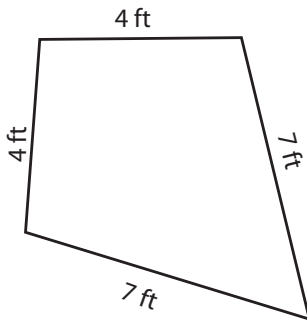
Perimeter = 20 yd

3)



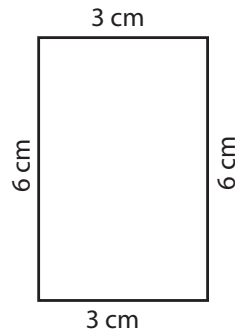
Perimeter = 32 in

4)



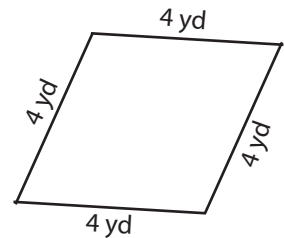
Perimeter = 22 ft

5)



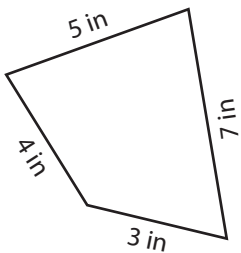
Perimeter = 18 cm

6)



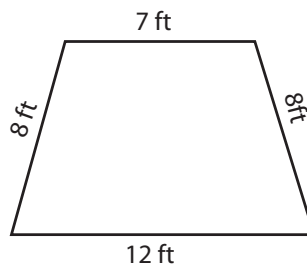
Perimeter = 16 yd

7)



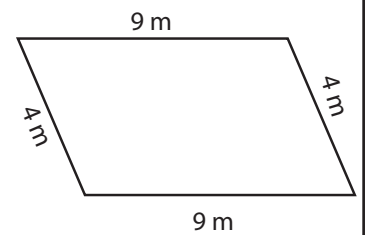
Perimeter = 19 in

8)



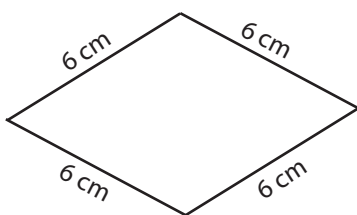
Perimeter = 35 ft

9)



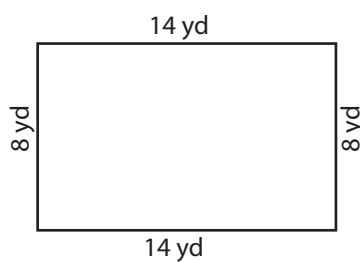
Perimeter = 26 m

10)



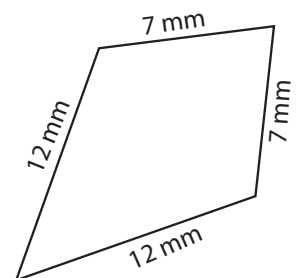
Perimeter = 24 cm

11)



Perimeter = 44 yd

12)



Perimeter = 38 mm